



8 ශ්‍රේණිය

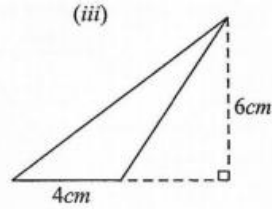
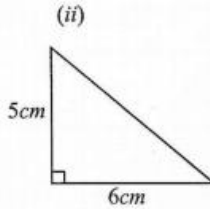
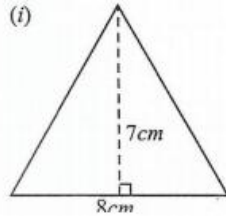
ගණිතය

ඒකකය : වර්ගඵලය

i පත්‍රය

01.

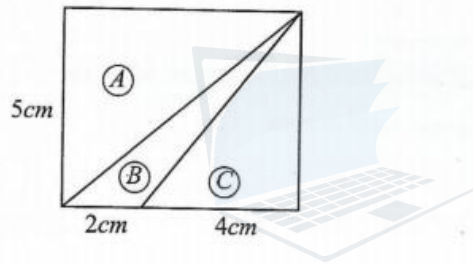
පහත දැක්වෙන රූපවල වර්ගඵලය සොයන්න.



ලකුණු 02 x 3 = 06

02.

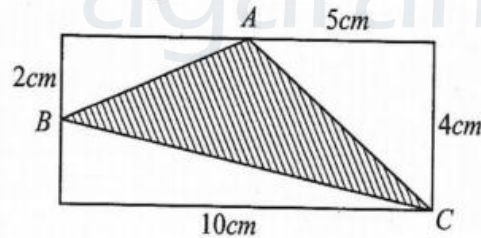
A, B, C කොටස් තුනේ වර්ගඵලය වෙන වෙනම සොයන්න.



ලකුණු 02 x 3 = 06

03.

ABC Δ යේ වර්ගඵලය සොයන්න.



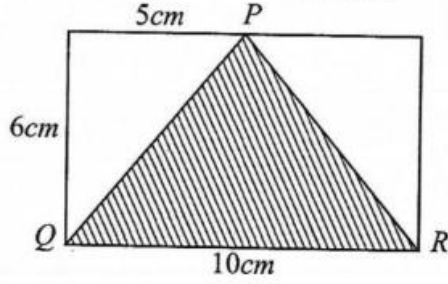
ලකුණු 06

Agaram.LK - Keep your dreams alive!

Agaram.LK - Keep your dreams alive!

04.

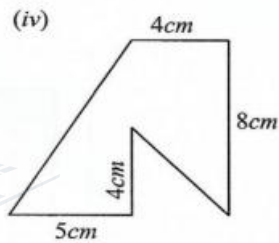
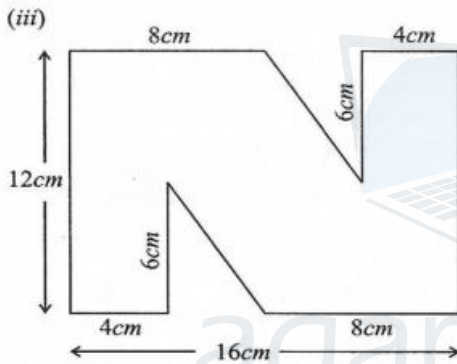
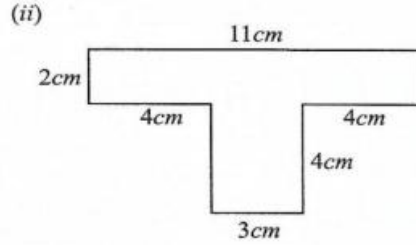
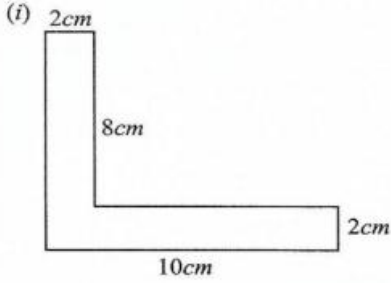
$PQR \Delta$  යේ වර්ගඵලය ගණනය කරන්න.



ලකුණු 04

05.

එක් එක් රූපයේ වර්ගඵලය සොයන්න.



ලකුණු 03 x 4 = 12

Wasantha waduge (BSc, PGDE)