

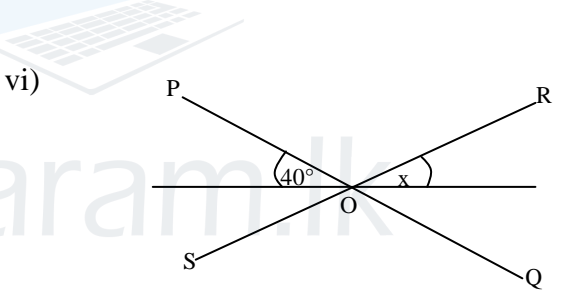
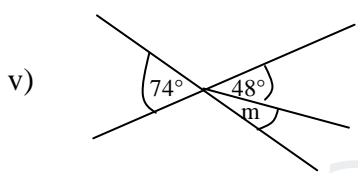
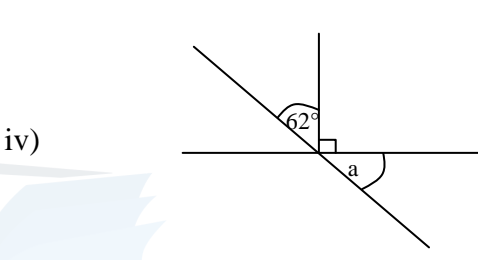
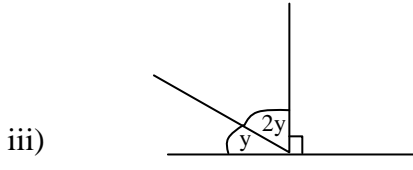
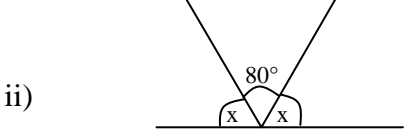
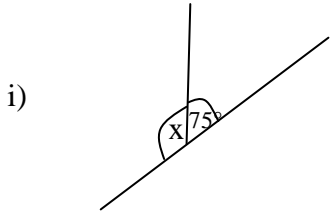


9 ශ්‍රේණිය

ගණිතය

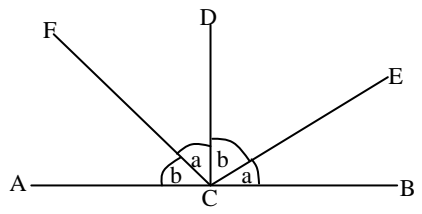
8. සරල රේඛා හා සමාන්තර රේඛා ආශ්‍රිත කෝණ

1) පහත දැක්වෙන එක් එක් රූපයේ විෂය සංකේත මගින් දැක්වෙන කෝණවල අගය සොයන්න.



$P\hat{O}S = 81^\circ$

2) ABC සරල රේඛාවේ  $F\hat{C}E = 90^\circ$  බව පෙන්වන්න.

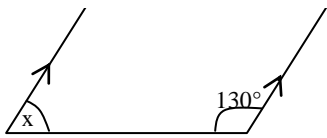


Agaram.LK - Keep your dreams alive!

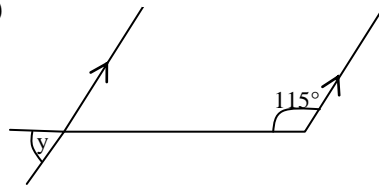
Agaram.LK - Keep your dreams alive!

3) මෙම රූප සටහන්වල ලකුණු කර ඇති කෝණ සොයන්න.

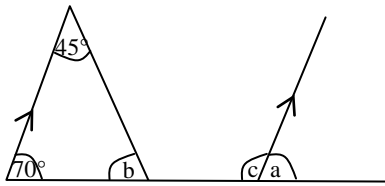
i)



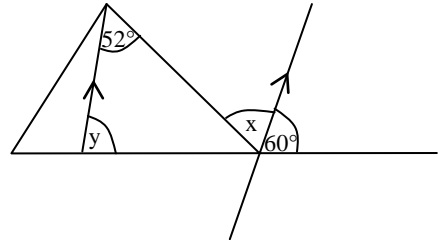
ii)



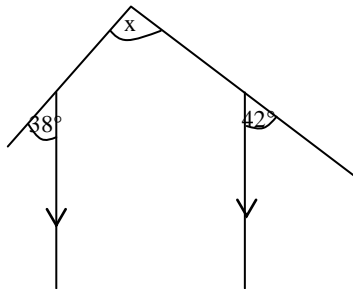
iii)



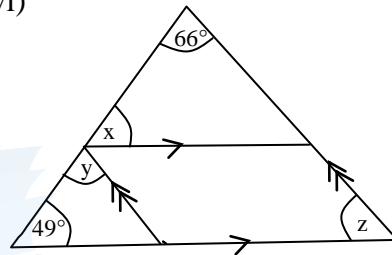
iv)



v)

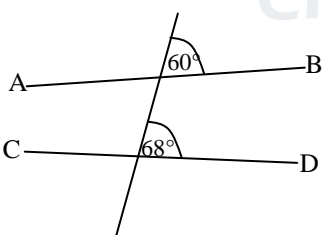


vi)

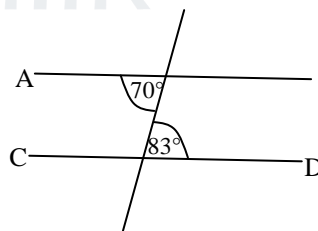


4) AB හා CD සරල රේඛා යුගල සමාන්තර වේද පිළිතුරට හේතු ලියන්න.

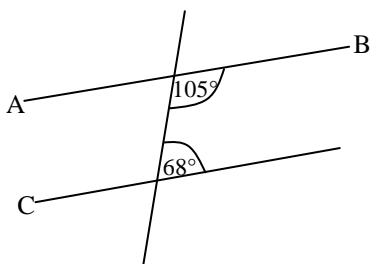
i)



ii)



iii)



iv)

