



PROVINCIAL DEPARTMENT OF EDUCATION-NORTH WESTERN PROVINCE

THIRD TERM TEST - 2020

WESTERN MUSIC - I

Grade 10

One Hour.

Name / Index No. :

• Answer all questions.

• Underline the most suitable answer.

01. Which of the following Italian term used to "in the style of"?


- (1) Da Capo
- (2) Andante
- (3) Alla
- (4) Marcia

02. Which of the following composers referred as 'Poet of the piano'?

- (1) W.A. Mozart
- (2) F. Chopin
- (3) L.V. Beethoven
- (4) Bartolomeo Cristofori

03. Which of the following key suitable for the key signature shown below,

- (1) A major
- (2) D major
- (3) G major
- (4) E major



04. Which of the following compositions for five performers?

- (1) quintet
- (2) quarted
- (3) trio
- (4) duet

05. Which of the following instrument plays in Kovil?

- (1) Horanewa
- (2) Harmonium
- (3) Natheswarm
- (4) Violin

06. Which of the following is written in the correct order in a music score?

- (1) clef, time signature, key signature, note
- (2) key signature, time signature, clef, notes
- (3) clef, key signature, time signature, notes
- (4) clef, key signature, notes, time signature

07. Which of the following is suitable for dotted crochet beats?

- (1) $\frac{6}{4}$
- (2) $\frac{6}{8}$
- (3) $\frac{9}{16}$
- (4) $\frac{4}{4}$

08. Which of the following composition belongs to Romantic period?

- (1) Album for the young
- (2) Rhapsody in Blue
- (3) Air on G string
- (4) Eroica Symphony

Agaram.LK - Keep your dreams alive!

Agaram.LK - Keep your dreams alive!

09. Which of the following is the B flat?

- (1) $\text{B}\flat$ (2) $\text{B}\sharp$ (3) B (4) $\text{B}\flat$

10. Which of the following is the plan of Rondo form?

- (1) ABACA (2) ABABAC (3) ABA (4) ABCA

11. Which of the following is not accepted behaviour of the audience at a concert?

- (1) sit quietly (2) distract the performers by speaking
 (3) mobile phones should be turned off (4) stay for the entire concert

12. Which of the following is example for 'Programme music'?

- (1) Minuet and Trio (2) Serenade
 (3) Song without words (4) Four seasons

13. Which of the following is used at the end of a phrase?

- (1) Triad (2) Cadence (3) Pause (4) repeat sign

14. Which of the following is note B on a ledger line?



15. Which of the following is best describes, 

- (1) inverted turn (2) turn
 (3) lower mordent (4) upper mordent

16. Which of the following is the interval for C to A^b?

- (1) major 3rd (2) minor 6th (3) perfect 8th (4) major 6th

17. Which of the following is related with 'Ga'?

- (1) Mediant (2) Subdominant (3) Submediant (4) Tonic

18. Which of the following is the common time?

- (1) C (2) $\frac{6}{8}$ (3) C (4) $\frac{2}{4}$

19. Which of the following style was used during the baroque period?
 (1) Monophonic (2) Homophonic (3) Polyphonic (4) Albertibass

20. Which of the following is the name of the instrument shown below,
 (1) Banjo (2) Mandolin
 (3) Veena (4) Guitar



21. Which of the following is a 'Mehe Gee'?
 (1) ඔළුඳු නිබෙන්නේ (2) ඔංචිලි විලි විල්ල මලේ
 (3) තණ්ඩලේ දෙන්නා (4) එක පදුරෙන් ලී සයක්

22. Which of the following is the opposite word for 'Pizzicato'?
 (1) Arco (2) Largo (3) Collegno (4) Alla

23. Which of the following is concords?
 (1) All major 3rd (2) All perfect intervals (3) All minor 3rd (4) All of them

24. Which of the following is another name for middle pedal of the piano?
 (1) Damper pedal (2) Una Coda (3) Soft pedal (4) Sostenuto pedal

25. Which of the following is a single reed wood wind instrument?
 (1) Flute (2) Oboe (3) Clarinet (4) Bassoon

26. Which of the following is equal to,
 (1) (2) (3) (4)

27. Which of the following is a correct statement,
 (1) A duplet occurs in simple time.
 (2) The relative major of C minor is E major.
 (3) When inverted a major interval become perfect.
 (4) Brass instruments produce sound through a metal mouth piece.

28. Which of the following is a Nadagam?
 (1) ගාමිබීර තේදනි (2) වාසනා දිනේකි
 (3) සුවඳ පද්ම (4) ප්‍රේමයෙන් මන රංජිත වේ

29. Which of the following is the odd one?
 (1) Aida (2) Swan lake
 (3) Sleeping beauty (4) Dance of the sugar plum

30. Which of the following is composer married daughter of his former piano teacher ?
 (1) Franz Shubert (2) Franz Liszt (3) Fredric Chopin (4) Robert Schumann

31. Which of the following is a series of dances with orchestral accompaniment?

- (1) Concerto (2) Overture (3) Ballet (4) Opera


32. Which of the following clef used to write Alto part in a short score?

- (1) Alto clef (2) Bass clef (3) G clef (4) Tenor clef

33. Which of the following instrument changes the length by an adjustable slide?

- (1) Trumpet (2) Trombone (3) Tuba (4) Oboe

34. Which of the following is suitable for fill the bar shown below,



- (1) (2) (3) (4)

35. Which of the following rhythm suitable for 'Yankee doodle came to town'?

- (1) (2) (3) (4)

36. Which of the following musical from 'Mary popins'?

- (1) Edelweiss (2) Chim chim cherry (3) Far beyond the star (4) Singing in the rain

37. Which of the following cadence ends with dominant to tonic?

- (1) Imperfect (2) Perfect (3) Interrupted (4) Plagal

38. Which of the following is a minor triad?



39. Which of the following is a Sri Lankan instrument?

- (1) Tabla (2) Violin (3) Flute (4) Horanewa

40. Which of the following is an example for variation form?

- (1) Fur Elise (2) Moonlight Sonata
(3) Prelude and Fuge (4) Harmonious Blacksmith



PROVINCIAL DEPARTMENT OF EDUCATION NORTH WESTERN PROVINCE

THIRD TERM TEST - 2020

WESTERN MUSIC - II

Grade 10

Two Hours

Name / Index No. :

- Answer five questions including question No. 01 Select two questions from each of the parts A and B answers on this paper itself.

01. Study the musical extract and answer the questions given below.


LITTLE WALTZ

Moderato M.M. ♩ = 80 - 108

- (i) Describe the speed of the above extract.
- (ii) What is the key of this piece?
- (iii) Explain the time signature.
- (iv) What is the value name of the note in bat 16?
- (v) Which rest occurs in this piece?
- (vi) What is the relative key of this piece?
- (vii) What is the metronome mark shown?
- (viii) What is the interval between first two notes in the first bar of bass clef?
- (ix) Write composers' name as 'Brahms' in the suitable place.

Agaram.LK - Keep your dreams alive!

Agaram.LK - Keep your dreams alive!

- (x) Explain - rit
 - pp.
 - 
- (12 marks)

• Select two questions from each section.


Part A

02 a) Put the correct time signature to the given bars.



(02 marks)

b) Write the complete melody with the ornaments written out in full.



(04 marks)

c) Fill the bars with the rests according to the time signature.



(02 marks)


d) Name the following notes.



(04 marks)


03 a) Write the following scales using key signature.

1. D harmonic minor scale Ascending and Descending in minims using Treble clef. mark the semitones with slurs.



(03 marks)

2. G melodic minor scale Descending in crotchet using Bass clef. Mark the semitones with slurs.



(03 marks)

b) Write the Italian words for the following words.

- 1. Very fast -
- 2. March -
- 3. Gradually becoming softer -
- 4. Sweetly -

(04 marks)

c) Write two features of Romantic period.

(02 marks)

04 a) Rewrite the given bars correcting the mistakes.

The image shows two musical staves. The first staff is in 4/4 time and contains the following notes: a quarter note G4, a whole rest, a quarter note F4, and a quarter note E4. The second staff is in 6/8 time and contains a triplet of eighth notes G4, A4, B4, followed by a quarter rest. Below these is a blank musical staff for the student to rewrite the first bar.

(02 marks)

b) Write the required triad above the root.

The image shows a musical staff with four notes: G4, Bb4, G4, and B4. Below the staff are four boxes labeled 'major', 'minor', 'minor', and 'major' respectively, indicating the required triads for each note.

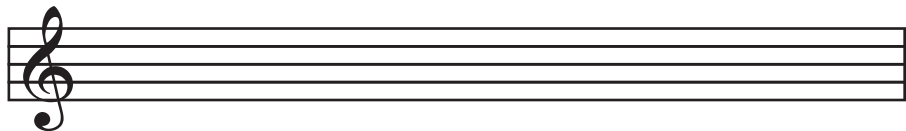
(04 marks)

c) Answer the following questions.

- 1. Name a Western classical orchestra in Sri Lanka.
.....
- 2. In which scale, semitones lie between 2 to 3, 5 to 6 and 7 to 8 in ascending and descending?
.....
- 3. A performance by a piano, violin and a cello known as
.....
- 4. Give an example for light song
.....

(04 marks)

d) Convert the following oriental notations in the western notation.



රි ම' ග ප / ධ ම' රි

(02 marks)

PART B

05 a) Write a short account on the following composers selecting one among them.

- G.F. Handel

- W.A. Mozart

- Peter Tchaikovsky

.....
.....
.....
.....
.....
.....
.....
.....
.....
.....
.....
.....
.....
.....
.....

(04 marks)

b) Write a rhythm pattern to the given melody.

Every honey bee
Fills with jealousy
When they see you out with me
I don't blame them goodness knows

.....
.....
.....

.....
.....
.....

.....
.....
.....

.....
.....
.....

(04 marks)

Grade 10

WESTERN MUSIC - II

c) Write the name of the following melodic intervals.

(04 marks)

06 a) Write the following cadences using key signature.

1. Perfect in F# minor
2. Imperfect in D major

(06 marks)

b) Name 4 Sri Lankan drums and describe one of them.

.....

.....

.....

.....

.....

.....

.....

.....

.....

.....

.....

.....

.....

.....

.....

.....

.....

.....

.....

.....

.....

.....

(04 marks)

c) Write two maintenance tips for Recorder.

.....

.....

.....

(02 marks)

Agaram.LK - Keep your dreams alive!

Agaram.LK - Keep your dreams alive!

07 a) Write the following short score in a open score.

(06 marks)

b) Fill in the blanks with appropriate answer.

1. A military instrument
2. An instrument with a slide
3. The lowest pitched Brass instrument
4. A transposing wood wind instrument

(04 marks)

c) Explain the Opera or Oratorio.

.....

.....

.....

.....

.....

.....

.....

.....

(02 marks)


Paper - I

- 1 -(3) 2 -(2) 3 -(4) 4 -(1) 5 -(3) 6 -(3) 7 -(2) 8 -(1) 9 -(4) 10 -(1)
 11-(2) 12 -(4) 13 -(2) 14 -(2) 15 -(2) 16 -(2) 17 -(1) 18 -(3) 19 -(3) 20 -(2)
 21-(3) 22 -(1) 23 -(4) 24 -(4) 25 -(3) 26 -(2) 27 -(4) 28 -(1) 29 -(1) 30 -(4)
 31-(3) 32 -(3) 33 -(2) 34 -(4) 35 -(3) 36 -(2) 37 -(2) 38 -(4) 39 -(4) 40 -(4)

01. (i) moderate speed
 (ii) G major
 (iii) 3 crochet beats in a bar
 (iv) dotted minim
 (v) crochet rest
 (vi) E minor
 (vii) $\downarrow = 60 - 108$
 (viii) perfect 5th
 (ix) (write the name in the right side corner)
 (x) ritarding the speed / very soft / gradually becoming softer


Part A

- 02 a) $\frac{6}{8}$ $\frac{3}{4}$ (02 marks)

b)  (04 marks)

- c) $\text{♩} \text{♩} \text{♩}$, $\text{♩} \text{♩} \text{♩}$ (02 marks)

- d) B sharp, D double sharp, C, A flat (04 marks)

- 03 a) 1.  (03 marks)

2.  (03 marks)

- b) 1. Fortissimo
 2. Marcia
 3. Decrescendo / Deminuendo
 4. Dolce (04 marks)

- c) more expressive emotional, picturesque (02 marks)

- 04 a)  (02 marks)

b)



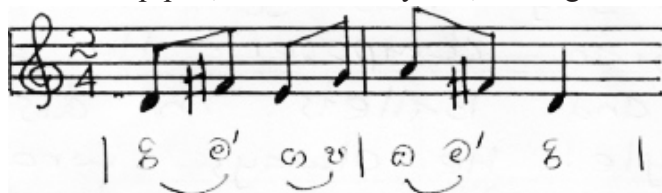
major minor minor major

(04 marks)

c)

1. National Youth Orchestra
2. In harmonic minor scale
3. Piano trio
4. Olu pipila, Shantha me reyame, Game gode sidhadhiye, Tikiri manike.....

d)



(04 marks)

(02 marks)

PART B

- 05 a)
- George Frederic Handel was born in 1685. He was a German composer. He was a master of Italian opera and English Oratorio. He was not from a musical family. He stayed in Italy for 3 years writing Italian operas. He settled in England under the patronage of King George 1 and queen Anne. He was blind. He died in 1759. His works are;
 - Messiah
 - Water music
 - Fire works
 - Rinaldo and Almira
 - Harmonious Blacksmith
 - Wolfgang Amadeus Mozart was born in 1756. He was an Austrian composer. He was a musical prodigy. He began to compose music at the age of five. He died at the age of 35, in 1791. He composed over 600 compositions, including 41 symphonies. His works are,
 - The jupiter symphony
 - The magic flute
 - The marriage of figaro
 - Don Giovanni
 - 17 masses
 - Piano Sonatas
 - Peter Tchaikovsky was born in 1840. He was a Russian composer. He wrote concertoes and Ballets in distinctive Russian style. He always wrote tuneful melodies and used orchestral sounds in a variety of exciting ways. His first Ballet was "The swan lake". It was based on a Legend. He died in 1893. His other Ballets are;
 - Dance of the sugar plums
 - Sleeping Beauty
 - 1812 overture

(04 marks)

b)

ev-ry ho-ney bee.....

fills with jea-lou- sy.....

when they see you out with me.....

I dont blame them good-ness knows.....

(04 marks)

- c) Major 2nd Perfect 4th
 Minor 7th Perfect 8th

(04 marks)

06 a)

V I I V

(06 marks)

- b) Getabera, Yakbera, Rabana, Udekkiya, Thammattama, Davula

- Getabera -
It is known as Magul beraya or up country drum. It is played with both hands. It has swollen belly. It is used for folk songs in upcountry dancing.
- Yakbera -
It is known as low country drum or Ruhunu beraya. It is used for low country dance and Thovil.
- Rabana -
It is a hand drum used to accompany Viridhu. Big Raban is used for Awurudhu ceremony.
- Udekkiya -
It is a small drum played with one hand. High and low notes are produced by on the pressure on the strings.
- Thammattama -
It is known as double kettle drum. It is played with 2 sticks. They are known as 'Kaddipu'. The sounds of 2 faces are different.
- Davula -
It is played with a 'Kaddipu' and hand. It is made of hard wood and strengthens with a rope. It is used for dances and Buddhist ceremonies.

(04 marks)

- c) 1. After use they should be cleaned.
 2. Turn to the correct side.
 3. Should be stored in a safe place without not too cold and not too hot.

(02 marks)

07 a)

(06 marks)

- b) 1. Trumpet, Trombone, Cornet
 2. Trombone
 3. Tuba
 4. /Clarinet

(04 marks)

- c) • Opera -
 Opera is a dramatic performance involves singing, dancing, costumes and orchestral accompaniment.

Ex. :- Aria by Verdi
 Lohengrin by Wagner
 Magic flute by Mozart
 Aida by Verdi

- Oratorio -
 Oratorio is a setting of a text for chorus, soloist and orchestra in a church. It has no acting, scenery and costumes but only with singing and music.

Ex. :- Christmas Oratorio by Bach
 The messiah by Handel
 The creation by Haydn

(02 marks)



PROVINCIAL DEPARTMENT OF EDUCATION NORTH WESTERN PROVINCE

THIRD TERM TEST - 2020

Grade 10

WESTERN MUSIC

One Hour & 30 min.

Name / Index No. :

PRACTICAL

01 Sing any song given in the syllabus.

- * Pitch
- * Rhythm
- * Expression
- * Memorizing
- * Presentation

(15 marks)

02 Scales

- * One scale on Recorder
C major / D major / F major
- * Two scales on piano
C major / D major / G major / F major

(15 marks)

03 Any piano piece (more than 8 bars)

(10 marks)

04 Any recorder piece (8 bars)

(10 marks)

05 Sight Reading - Piano or Recorder

(10 marks)

06 Listening - listen and clap
listen and sing
identify the time
identify interval
identify triad (major / minor)
identify cadence (perfect / imperfect)
identify ornament (appoggiatura / mordant)

Sight singing

(40 marks)

WWW.PastPapers.WIKI