



13. What is the deepest fresh water lake located in Asia ?

- |                 |                  |
|-----------------|------------------|
| 1. Bickle lake  | 2. Ire lake      |
| 3. Bolkash lake | 4. Victoria lake |

14. The two Japanese companies that are taken the pioneer place for Manufacturing motor bikes are.

- |                        |                     |
|------------------------|---------------------|
| 1. Toyota, Honda       | 2. Honda, Yamaha    |
| 3. Yamaha, Mitshubishi | 4. Nissan, Kawasaki |

15. What is the name for a lengthy stretch of an area filled with brackish water, separated from the sea by sand bars which have narrow outlets to the sea?

- |            |          |
|------------|----------|
| 1. Marshes | 2. Delta |
| 3. Lagoon  | 4. Bay   |

• Match A with B and write the relevant letter on the given space in front of the given information

A

B

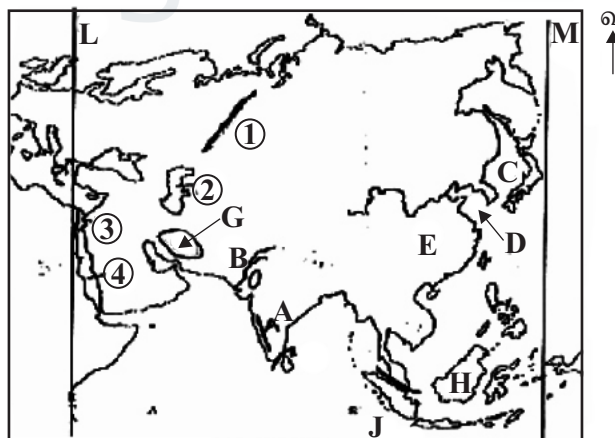
- |                                     |     |                       |
|-------------------------------------|-----|-----------------------|
| 16. Tropical rain forest            | ( ) | A. Vercoyazk          |
| 17. Desiduous forest                | ( ) | B. Pine, Spruse       |
| 18. Coniferous forests              | ( ) | C. Jakobabad          |
| 19. The lowest temperature in Asia  | ( ) | D. Rosewood, Mahogany |
| 20. The highest temperature in Asia | ( ) | E. Oak, Mulberry      |

Part - II

• Answer 5 question including the first question

• First question is compulsory

01. A. Study the given map of Asia and answer the questions given below.



- |  |           |
|--|-----------|
| i. Name the mountain range shown by letter A         | (1 marks) |
| ii. Name the river shown by letter B                 | (1 marks) |
| iii. What is the letter shows the Yellow Sea?        | (1 marks) |
| iv. What is the country that is shown by letter 'E'? | (1 marks) |
| v. What is the Plateau shown by letter 'G'?          | (1 marks) |

- vi. What is the letter that shows the Java Island? (1 marks)
- vii. What is the physical feature that is shown by letter 'K'? (1 marks)
- viii. What is the letter that shows the 25° East longitude line? (1 marks)

B. Boundaries that separate Asia from Europe and Africa are shown by 1,2,3 & 4 Name them

- 1. .... mountain range
- 2. .... sea
- 3. .... channel
- 4. .... sea (8 marks)

02. i. Complete the following grid using the types of the climate that exist in the Asian continents

Climatic Zone	Climatic type	Distributed areas/ countries
Tropical	1. ....	Java Sumathra Islands
	2. Tropical monsoon Climate	2. .... Myanmar
	3. .... Warm desert climate	North East of India, Bangladesh 4. ....
Temperature	Warm temperature climate	5. ....
	6. ....	East China, Japanese Islands
Frigid	7. ....	Siberian region and the Northern parts of Asia
	Mountain climate	8. ....

(8 marks)

ii. Write 3 facts that affects to decide the types of climate. (3 marks)

03. i. Following pictures show the two types of human races live in the Asian region. Name those human races and write two countries each where they live.



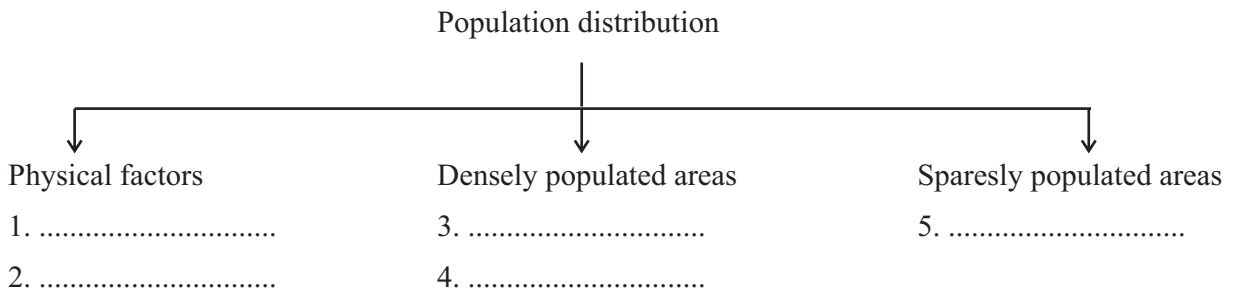
Human race                      A .....                      B .....

countries where                      1. ....                      1. ....

they live                              2. ....                      2. ....

(6 marks)

ii. Complete the following chart regarding the population distribution in the continent of Asia.



04. Fill in the blanks in the following grid about the main two crop seasons. Duration and the crops grown in Pakistan.

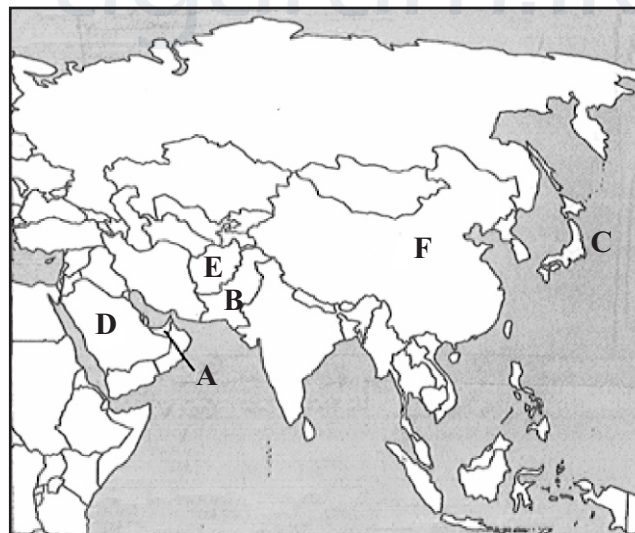
Crop season	Duration	Crops grown
Khariff	1. ....	2. .... 3. ....
4. ....	from November to March	5. .... 6. ....

(6 marks)

ii. Japanese auto mobiles are in the fore front in the world. write 3 reasons for it. (3 marks)

iii. Name 2 products under petro chemical industries in Japan. (2marks)

05. Following is a map of the continent of Asia



i. Write the letters that are shown the countries Pakistan, Japan & Dubai respectively. (3 marks)

ii. a. What are the products that are helped to make the basement of the economy of the Dubai state?

b. What is the main reason for developing the Dubai as a service center? (2marks)

iii. Write 3 service industries carried out by Dubai (6 marks)



**Down**

1. A district in the Northern province (11 marks)
2. An industrial country in Asia.
3. An Island which has a religious importance in the Northern part of Sri Lanka.
4. A valuable mineral used for making ornaments.
5. The area which has the highest temperature.
6. Areas covered with vegetation.

**Across**

1. A group of Islands located in the Indian ocean.
2. A main ethnic race in Asia.
3. A river flows in to the Pacific ocean.
4. A country located in the East Asia.
5. A climatic zone.



agaram.lk

## First Term Test - 2019

## Geography (Answer)

## Grade 09

## Part - I

- |            |        |          |            |               |
|------------|--------|----------|------------|---------------|
| 1. Eastern | 2. 30% | 3. China | 4. Caspian | 5. Coniferous |
| 6. ✓       | 7. ✓   | 8. ×     | 9. ×       | 10. ✓         |
| 11. 2      | 12. 4  | 13. 1    | 14. 2      | 15. 3         |
| 16. D      | 17. E  | 18. B    | 19. A      | 20. C         |

## Part - II

01. A I. Western Ghats II. Indu/ Sindu river III. D IV. China (8 marks)  
V. Iran Plateau VI. J VII. Straits VIII. L (2x4=8 marks)
- B 1. Ural mountain 2. Caspian tea 3. Suas channel 4. Red sea
02. I 1. Tropical rainy climate 2. India, Sri Lanka 3. Tropical savanna climate  
4. Thar desert, Middle East countries 5. Areas surrounding the Mediterranean sea  
6. Wet temperate climate 7. Polar and Tundra climate  
8. Regions surrounding the mountain range of the Himalaya. (8 marks)
- II Changes of the rainfall, Affects of the monsoonal winds, Affects of the Oceanic Currents  
Continental location, Situation of mountain ranges, height from the sea level etc.
03. I A Mongoloid Caucasoid.  
Countries - China, Japan - India, Afghanistan, Pakistan, Sri Lanka,  
Malayasia, Korea, Singapore Arabian Countries (6 marks)
- II Physical factors that are impacted for the distribution of population.  
relief features Climate Soil drainage  
Densely populated areas  
East Asia South Asia South East Asia give marks for writing the river valleys  
Sparsely populated areas  
Central Asia Northern grasslands Mongolia Gobi Thar desert
04. I 1. from April to October II high quality comfortable  
2,3) cotton, Paddy, Millet, Sugar cane durability fuel economy  
4) Rabi consists with new components (3 marks)  
5,6) Wheat, Barley, Oats (6 marks) III Plastic, Polyester, Polythene (2 marks)
05. I 1 B 2 C 3 A  
II a) Petroleum products b) Physical environment of Dubai is not suitable for agricultural activities (2 mks)  
III • An aviation center of modern crossroads connecting East & West  
• Importance of port Jabil Ali as the major Middle Eastern export center as well as free trade  
harbour  
• Center for tourists attraction & tourist services providing Center.  
• As a center of providing international communication service.  
• As a center that provides an indoor stadium and day & night cricket stadium for cricket &  
tennis at international level  
• Establishment of the largest trade center called Dubai Mall.
06. I 1. Coastal plain 2. Intermediate plain 3. Central hills (3 marks)  
II 1. 0 - 30 m 2. 30 m - 300 m 3. above 300 m (3 marks)  
III A Island (Kaits, Delft, Mannar) B Bay (Koddar, Weligama, Arugum)  
C Point (Pedro, dondra) (5 marks)
07. **Down**  
1. Vavunia 2. Japan 3. Nainathieve 4. Gold 5. desert 6. Forests
- Across**  
1. Andaman 2. Caucasoid 3. Amur 4. Korea 5. Tropical (1x11=11 marks)