

සියලුම හිමිකම් ඇවිරිණි
All Rights Reserved



PROVINCIAL DEPARTMENT OF EDUCATION - NORTH WESTERN PROVINCE

SECOND TERM TEST 2019

GEOGRAPHY

Grade 09

Two hours

Name / Index No. :

PART - A

Answer all the questions.

- Select the most suitable answer and write it on the given space for question No. 01 to 05.

- 01 Out of main rivers, 34 rivers starting from hill country, flow in an pattern. (Aerial / Dendritic / Trellis)
- 02 Dubai mall is the largest centrer in the world. (communication / trade / sports)
- 03 Drinage and soil are factors the affect to the distribution of population. (physical / cultural / human)
- 04 Agricultural activities like paddy cultivation and chena cultivation can be seen in the zone of Sri Lanka. (dry / wet / intermediate)
- 05 Animal species like snow dog, sable and mink can be seen in forests. (Deciduous / tropical rain / coniferous)

- If the following sentences are correct put (✓) if not put (✗) for question No. 06 to 10.

- 06 Physical landscape of Sri Lanka caused for the human activities. ()
- 07 In the rurban settlements, rural features can be seen than the urban features. ()
- 08 Rivers, Amudaria and Serderia flow in to capsian sea. ()
- 09 Gampaha is the district that has the highest density of population. ()
- 10 The motherland of main religions like Buddhism, Hinduism, Islam and Catholic is the Asia.()

• **Underline the most suitable answer for question No. 11 to 15.**

- 11 The area that receives the lowest rainfall in the world is,
- (1) Gobi desert (2) Atacama desert
(3) Thar desert (4) Sahara desert
- 12 The islands that are located in the continent of Asia are,
- (1) Sumatra, Tasmania (2) Borneo, Madagascar
(3) Taiwan, Java (4) Hawaii, Sri Lanka
- 13 'Jacobabad' city is located in,
- (1) Afghanistan (2) Pakistan
(3) India (4) Bangladesh
- 14 An Asian country that conducts the industries based on raw materials and mineral oil is,
- (1) Philippines (2) Singapore
(3) Sri Lanka (4) Japan
- 15 The district that has the third largest population in Sri Lanka is,
- (1) Kandy (2) Kurunegala
(3) Gampaha (4) Kalutara

• **Match 'A' with 'B' and write the letter in front of it.**

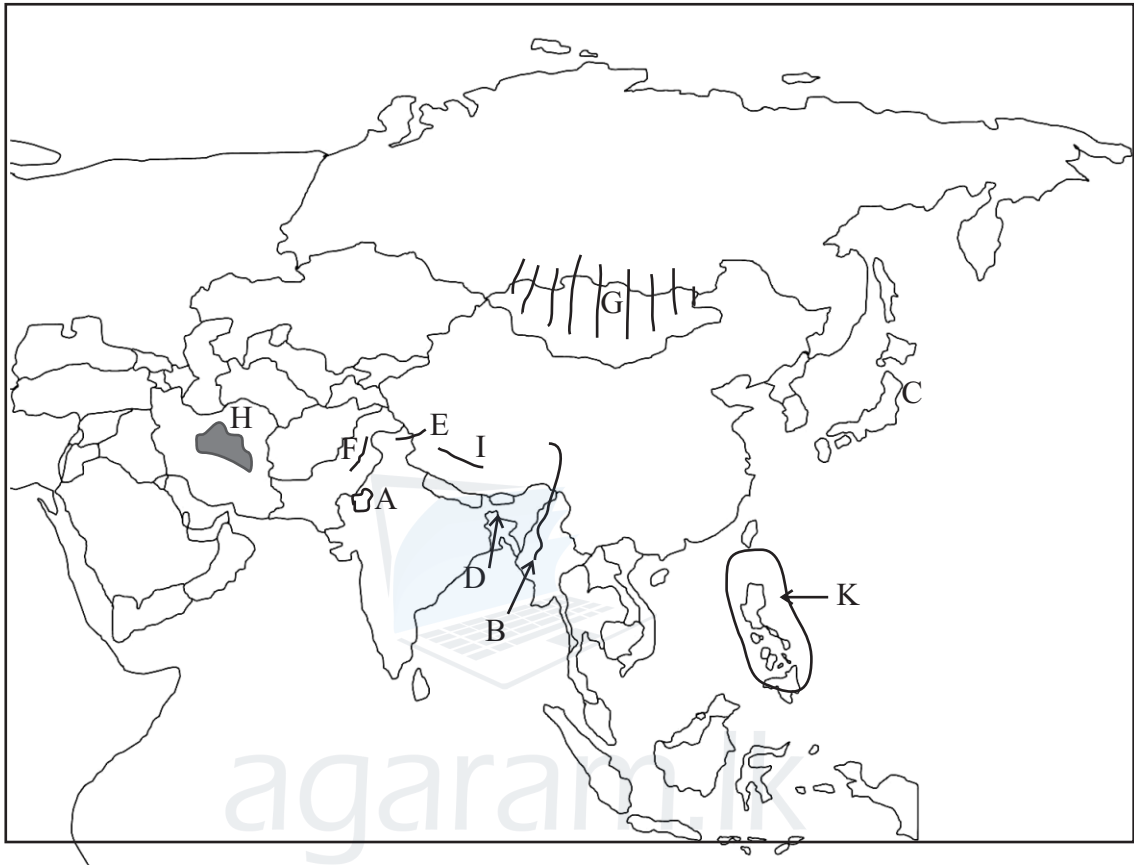
"A"

"B"

- | | | | | |
|----|-------------------------------------|---------|---|--------------------------|
| 16 | Ritigala, Sigiriya, Mihintale | (.....) | A | areas spreaded mangroves |
| 17 | Haputale, Galagedara, Ginigathhena | (.....) | B | Residual hills |
| 18 | Bundala, Kalametiya, Anawilundawa | (.....) | C | high peaks |
| 19 | Thotupola, Kirigalpotta, Namunukula | (.....) | D | Plateaus |
| 20 | Kandy, Hatton, Welimada | (.....) | E | Gaps |
| | | | F | Plains |

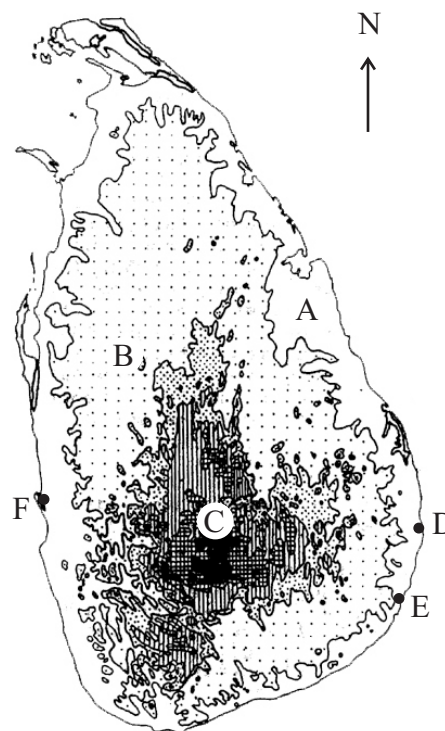
- Answer five questions including the first question.

01 (A) Answer the questions using the map of Asian region.



- (1) Name the desert shown by letter A.
- (2) Name the river shown by letter B.
- (3) Write the letter that shown the Suleiman mountain range.
- (4) What is the letter shows Japan which is a main industrial country in the world.
- (5) Name the country that is sparsely populated in the world shown by letter G.
- (6) Write the name of the group of Islands shown by letter K.
- (7) Write the letter that shows the country in South Asia which faces floods frequently.
- (8) Name the plateau area shown by letter H. (08m.)

- (B) 1. Name the relief zones shown by letters A, B and C. (03m.)
2. Name the point shown by letter D. (01m.)
3. Name the bay shown by letter E. (01m.)
4. Name the lagoon shown by letter F. (01m.)
5. Name 02 residual hills located in the 'B' zone. (02m.)



02



A



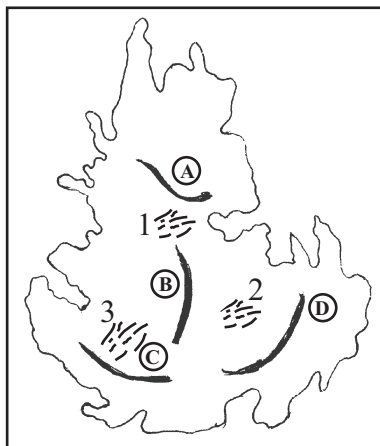
B



C

- (i) Write the main three sectors of economic activities shown by letter A, B, C. (03m.)
- (ii) Name 03 economic activities belong to the sector shown by letter A. (03m.)
- (ii) (a) Name the province that economic activities belong to sector shown by letter B spreaded mostly in Sri Lanka. (01m.)
- (b) Write 02 environmental problems related to the spread of this above mentioned sector. (04m.)

03 (i) Name the main mountain ranges shown by letters A, B, C, D in the following map. (04m.)



(ii) Name the plateaus shown by No. 1, 2, 3 respectively. (03m.)

(iii) Write the importance of the central hills in Sri Lanka using 02 facts. (04m.)

04 (i) Name 03 river valley civilizations that belong to the Asian region. (03m.)

(ii) Complete the following table. (04m.)

Type of humans	Features of the body	Living countries
Mongoloid	1. * People are short and tall	* Japan 2.
3.	* Curly hair * Fair in complexion	4. * Sri Lanka

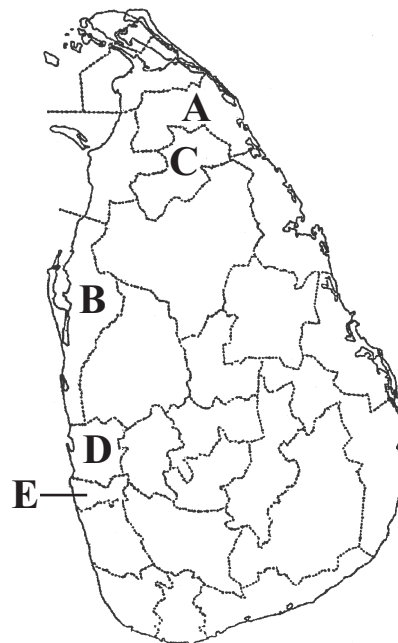
(iii) Write 2 facts for the importance of Japan as the main industrial country in Asia. (04m.)

05 Complete the following table using the natural vegetation in the climatic zone in Sri Lanka.

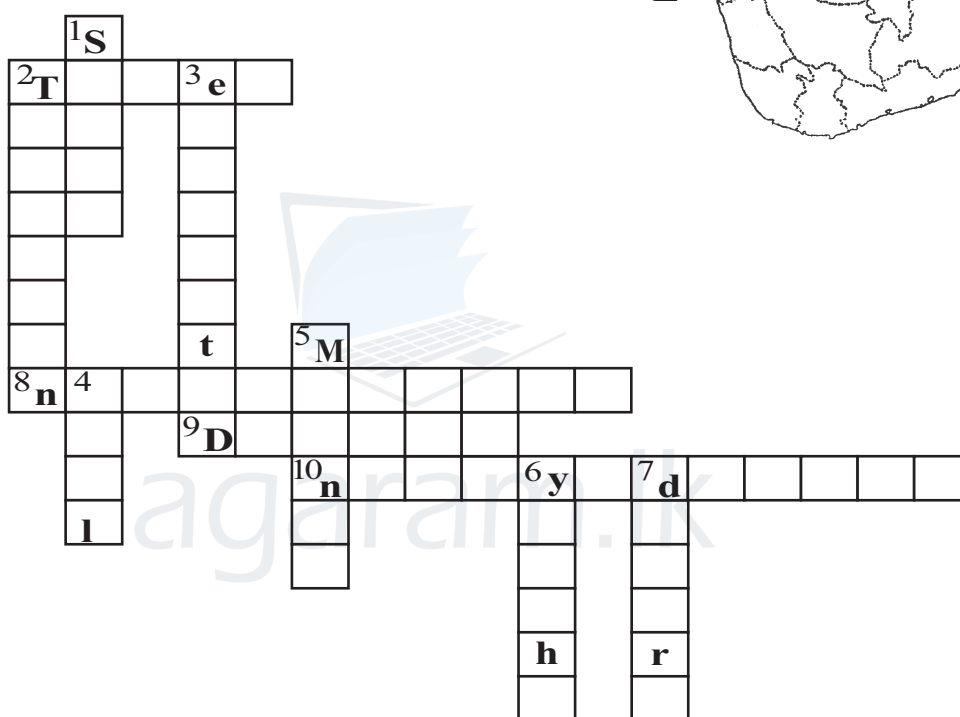
Type of Vegetation	Spreaded areas	Special features
Tropical wet forests	1. Morapitiya	* Trees grow throughout the year. 2.
Dry mixed evergreen forests	3. 4.	* Forests are light green in colour 5.
6.	Piduruthalagala 8.	7. * With the increase in the altitude, height of the trees gets reduced gradually.
Mangroves	9. 10.	* Roots spread above water. They are called respiratory roots. 11.

(11m.)

- 06 (i) Name 02 main countries that densely populated in Asia. (02m.)
- (ii) Name the 3 districts shown by A, B and C which are sparsely populated in the given map of Sri Lanka. (03m.)
- (iii) (a) Name the two districts shown by D and E that densely populated in the given map.
- (b) What is the province that above two districts belong.
- (c) Write 03 facts for high density of population in that province. (06m.)



07 Complete the puzzel using given clues.



Down

1. The largest irrigation system in Pakistan is under this river.
2. A large mountain rang in Asia.
3. The highest mountain peak in the world.
4. The boundary that separates the continents of Asia from the continent of Europe.
5. A district in Sri Lanka which has less density of population.
6. A main motor bike company in the world.
7. These areas are mostly sparsely populated areas.

Across

2. It is called as the Rooftop of the world.
8. The district that has the lowest temperature in Sri Lanka.
9. A head that belong to the southern province.
10. An area that distributed the low country forests in Sri Lanka.

(11m.)

ANSWER PAPER / PART - I

- (01) Aerial (02) Trade (03) Physical (04) dry (05) coniferous
 (06) ✓ (07) ✗ (08) ✗ (09) ✗ (10) ✓ (11) 1 (12) 3 (13) 2
 (14) 4 (15) 2 (16) B (17) E (18) A (19) C (20) D

(2 x 20 = 40 m.)

PART - II

- 01 (A) (i) Thar (ii) Irawadi (iii) F (iv) C (v) Mongolia
 (vi) Philippine (vii) Bangladesh (viii) Tibet plateau
 (B) (i) A Coastal plain B Intermediate plain C Central hills
 (ii) Sangamankanda Point (iii) Arugambay
 (iv) Govinda hela / Kataragama / Sigiriya / Ritigala
 (v) Negambo
- 02 (i) A Agricultural B Industrial C Services
 (ii) raring animals / cultivated crops / fishing industry / Tea, Rubber plantation
 (iii) (a) Western
 (b) Water pollution / Air pollution / Gather waste / Scarcity of lands
- 03 (i) A Knuckles B Piduruthalagala C Samanala D Namunukula
 (ii) 1. Kandy plateau 2. Welimada plateau 3. Hatton plateau
 (iii) for tourist industry / bio diversity / for tea plantation / for growing ornamental flowers / for raring animals / for producing milk / for growing fruits / for cultivating vegetables / Give marks for the correct answer.
- 04 (i) Howang Ho / Indus Valley / Mosapothemia (Upratase, Taigrees)
 (ii) 1. Hair is black and brown / body is yellow colour / Flat face / eye brows are grown
 2. China / Malaysia / Korea / Singapore etc.,
 3. Cocosoid
 4. India / Afghanistan / Pakistan / Arab countries
 (iii) * Produce auto mobils
 * Produce electric appliances
 * Produce machines, iron and steel, ship building, chemical, computer, Robot technology etc.,
 * 27.5% of GNP is from industrial sector.
 * 26.2% of labour force in industrial sector.
 * Conduct industries by importing raw-materials and mineral oil.
- 05 Use page from 43 to 49 in the text book.
- 06 (i) China / India
 (ii) A Mulativ B Mannar C Vavunia
 (iii) (a) D Gampaha E Colombo (b) Western
 (c) Favourable Climate / Infrastructure facilities / Educational facilities / Health facilities / More job opportunities / Urbanization / more industries / more service centers / Capital cities / Commercial cities / Harbour / Airport
- 07 **Down**
 1. Sindu 2. Tienshan 3. Everest 4. Ural 5. Mannar
 6. Yamaha 7. desert
- Across**
 2. Tibet 8. Nuwara Eliya 9. Dondra 10. Nakiyadeniya