




PREPARED BY: SAJEEVANIE RATNAYAKE

**PAPER 1****(01) Underline the most suitable answer.**

(1) Which of the following is the suitable name for the given cadence



1) Perfect

2) Imperfect

3) Plagal

4) Interrupted

(2) Which of the following Roman numerals fits the following chords



1) I, V

2) I, Vb

3) I, VI

4) V, I

(3) Which of the following is a false statement for a cadence

- 1) Points of rests of music are indicated by chords
- 2) Cadences are found at the end of a phrase
- 3) Perfect and Imperfect cadences work like full stops
- 4) An Imperfect cadence moves from chord I to chord V

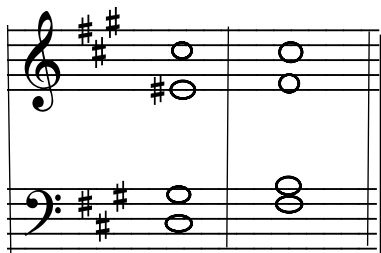
(4) Which of the following cadence is **not suitable** to end a musical sentence

- 1) Perfect
- 2) Plagal
- 3) Interrupted
- 4) Phrygian

(5) Which of the following two notes would be the Bass notes of the Interrupted cadence in C sharp minor

- 1) G, C
- 2) C#, G#
- 3) G#, A
- 4) G#, A#

(06) Which of the following is the suitable name given for the cadence given below.



- 1) Interrupted cadence in Ab major
- 2) Half close cadence in Ab major
- 3) Amen cadence in F minor
- 4) Full close in F# minor

**PAPER II**


(01) Write these cadences in SATB (FOUR PARTS), with the correct key signature

Perfect in A major      Interrupted in C minor      Imperfect in E major



(02) Write the following cadences in SATB using accidentals

Plagal in F# minor      Interrupted in Db major      Plagal in B major



**(04) Write the descriptive answers for the following questions**

1) Describe what a cadence is.

.....  
.....  
.....

1) Name 4 types of cadences and give a short description about each.

.....  
.....  
.....  
.....  
.....  
.....  
.....  
.....  
.....  
.....  
.....  
.....  
.....  
.....  
.....  
.....  
.....  
.....  
.....  
.....  
.....  
.....



Agaram.LK - Keep your dreams alive!

Agaram.LK - Keep your dreams alive!