

# Nalanda College – Colombo 10


## Unit Evaluation

GRADE 9

WESTERN MUSIC

UNIT 4: LEGER LINE NOTES & TRANSPOSING NOTES FROM ONE CLEF TO ANOTHER CLEF

### PAPER I

(01) Which of the following are the names of the notes of the given bar 

- 1) M.C, C, D                      2) C, D, M.C                      3) C, M.C, D                      4) D, C, M.C

(02) Which of the following is the note F?



(03) Which of the following is the letter name of the note on the 3<sup>rd</sup> leger line above the Bass staff?

- 1) F                                      2) D                                      3) B                                      4) G

(04) Which of the following is the letter name of the note on the 2<sup>nd</sup> leger line below the Treble staff?

- 1) D                                      2) E                                      3) A                                      4) Middle C

(05) Which of the following is odd one out of the given notes?



- 1)                                      2)                                      3)                                      4)

### PAPER II

(01) Name the following notes.



.....




.....

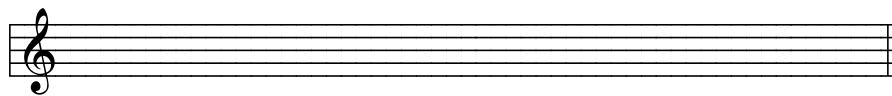
(02) Transposing the following melody as required.




(a) Transpose the **given melody** in to the bass clef in same pitch.



(b) Transpose the **given melody** one octave higher in the same clef.



(c) Transpose the **given melody** one octave lower in the bass clef.



agaram.lk

PREPARED BY: R.M.S.U.K. RATNAYAKE