



බස්නාහිර පළාත් අධ්‍යාපන දෙපාර්තමේන්තුව
மேல் மாகாணக் கல்வித் திணைக்களம்
Department of Education - Western Province

වර්ෂ අවසාන ඇගයීම
ஆண்டிறுதி மதிப்பீடு - 2019
Year End Evaluation

ශ්‍රේණිය } தரம் } 06 Grade }	විෂයය } பாடம் } Western Music Subject }	පත්‍රය } வினாத்தாள் } I, II Paper }	කාලය } காலம் } 02 hours Time }
------------------------------------	---	---	--------------------------------------

Name :-..... Index No :-.....

Underline the correct answer.

1. The correct musical Alphabet is ,
(i) GBDFA (ii) ABCDEFG (iii) EGBDF (iv) ACEG

2. The correctly written bar is ,

(i) (ii) (iii) (iv)

3. The Sri Lankan drum played for Buddhist wedding is ,
(i) Side drum (ii) Bass drum (iii) Tabla (iv) Getaberaya

4. The lowest note is,

(i) (ii) (iii) (iv)

5. The number of bar lines in the music is ,

(i) 3 (ii) 2 (iii) 4 (iv) 5

6. The suitable time signature for the given rhythm is ,

(i) Duple (ii) Triple (iii) Quadruple (iv) Three time

7. We make use of an x-ray sheet to.....

- (i) to make a Cymbal (ii) to make shakers
- (iii) to make clappers (iv) to make a side drum

Agaram.LK - Keep your dreams alive!

Agaram.LK - Keep your dreams alive!

8. Which of the following is **not** a Sri Lankan drum

- (i) Getaberaya (ii) Side drum (iii) Daula (iv) Rabana

9. Underline the word which is hidden with notes.



- (i) BAD (ii) GFB (iii) BIG (iv) BOY

10. "Fah" is thedegree of the Scale. (i) 3rd (ii) 5th (iii) 4th (iv) 6th

Mark \checkmark or X

11. There are only white notes on a Key board ()
 12. We all stand at attention for the National Anthem ()
 13. There are 6 sections of instruments in the orchestra ()
 14. Clean the mouthpiece of the Recorder after playing ()
 15. The Conductor stands in front of the Orchestra ()

Match A to B

A

B

16. Ascending Koel
 17. Repasz Band march In duple time
 18. A bird sings at the festival season Going up

19.



A

20.




B

(2x20 = 40)

Part II

Answer 04 questions . (15x4= 60 marks)

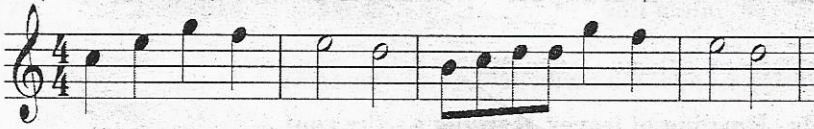
01. a. Study the given music and answer the questions.



- i. How many bars are there in the melody
 ii. Draw a double bar at the correct place.....
 iii. Name the Clef used in the melody

- iv. Name the rest at the 7th bar in the melody
- v. Name the lowest note in the music
- vi. How many quavers are there in the melody
- vii. Name any instrument which could play the above melody
- viii. How many minims are there in the music
- ix. Write the letter names of the notes in the square

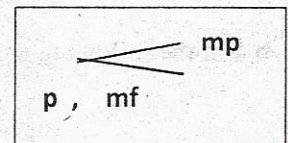
b. Select the suitable dynamic mark from the box and write as required.




.....
Mezza forte

.....
Crescendo

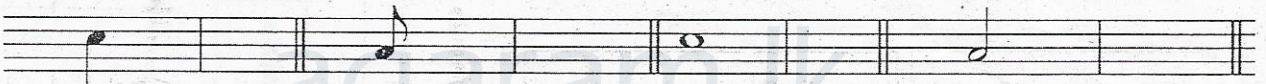
.....
piano




02. a. Name the following notes (8 marks)-




b. After each of these notes write a rest of equal value. (4 marks)



c. Mark the given notes on the key board with dots. (3 marks)



03.a. Write the missing notes of C major scale (4 marks)



b. Fill the following Table with Time names , Rests and number of beats (8 marks)

Time name	Rest	Number of beats
Semi breve		
	Quaver	
		01
		02

