



සජ්‍යාතිර පළාත් අධ්‍යාපන දෙපාර්තමේන්තුව Department of Education - Western Province	සජ්‍යාතිර පළාත් අධ්‍යාපන දෙපාර්තමේන්තුව மேல் மாகாணக் கல்வித் திணைக்களம் Department of Education - Western Province	පළාත් අධ්‍යාපන දෙපාර්තමේන්තුව Department of Education - Western Province
---	---	---

වර්ෂ අවසාන ඇගයීම
ஆண்டிறுதி மதிப்பீடு - 2019
Year End Evaluation

ශ්‍රේණිය } தரம் } 06 Grade }	විෂයය } பாடம் } Geography Subject }	පත්‍රය } வினாத்தாள் } I, II Paper }	කාලය } காலம் } 02 hours Time }
------------------------------------	--	---	--------------------------------------

Name :-..... Index No :-.....

- Important :
- Answer all the questions in part I on this paper itself.
 - Answer part II in a separate sheet, attach it to the 1st paper and handover.

Part I

- For question 01 to 05 write the most appropriate answer selected from the brackets.
 (Kandy, Rathnapura, Sri Jayawardenapura Kotte, Divisional Secretariat, Grama Niladhari Division, North West, North East, Galle)
- is the smallest administrative unit that belongs to a school.
 - is the main city which belongs to Sabaragamuwa Province.
 - is the sub direction in between West and North.
 - district belongs to Central province.
 - is a very significant city due to the location of Dutch Fortress, Port, Light house in coastal area.
- For question 06 to 10 underline the most appropriate answer.
- The government department which is located in Buddhaloka Mawatha, Colombo, gives the most important information to us.

1. Department of Education	2. Department of Health
3. Department of Irrigation	4. Department of Meteorology
 - An area which is famous for mask industry based on traditional craftsmanship.

1. Ambalangoda	2. Pilimathalawa	3. Radawadunna	4. Dumbara
----------------	------------------	----------------	------------
 - The narrow Strait which separates India and Sri Lanka.

1. Malakka Strait	2. Magalan Strait
3. Pork Strait	4. Beijing Strait

Agaram.LK - Keep your dreams alive!

Agaram.LK - Keep your dreams alive!

09. It is the major source of all energies.

- 1. Petroleum
- 2. The Sun
- 3. Electricity
- 4. Natural Gas

10. Direction of the wind brings Monsoon Rains to Western and Southern provinces.

- 1. East
- 2. North West
- 3. South West
- 4. North

● For questions 11 to 15 mark (✓) if the statement is true or (✗) if the statement is false.

- 11. "Avichchiya" is a migrant bird. (.....)
- 12. A condition of atmosphere that prevails in a certain place for a short period of time is named as climate. (.....)
- 13. Compass is useful in finding the correct direction. (.....)
- 14. "Thaipongal" is celebrated by Islams. (.....)
- 15. Sri Jayawardenupara Kotte is the main Administrative city in Sri Lanka (.....)

● For 16 to 20 use the given Map to answer the following questions.



- 16. Letter indicates Sri Lanka.
- 17. Letter indicates Asian Continent.
- 18. Letter indicates Australia.
- 19. Letter denotes equator.
- 20. Letter denotes African Continent. (2 x 20 = 40)

Test 6


What do they say?

My baby is duckling



duck

My baby is



cat


My baby is



Bird


- | | |
|--------|----------|
| calf | tadpole |
| kitten | duckling |
| foal | nestling |

My baby is



horse

My baby is



cow

My baby is



frog

(5 marks)

Test 7

Read the paragraph and find the adjectives and adverbs and write them in the cage given below. First one is done for you.

Today I helped my mother to cook a delicious dinner. We carefully cut the fresh vegetables and slowly placed them into a boiling pot of water. Next, mother quickly browned the frozen chicken and patiently let it cook through. I waited at the dinner table. My next job which was to gently sprinkle spices into the chicken soup.

Adjective →	Adverbs →
(i) fresh	(i)
(ii)	(ii)
(iii)	(iii)
(iv)	(iv)
(v)	(v)
(vi)	

(10 marks)

Test 8

Match these words with their opposites with the correct number in the box. First one is done for you.

A

- good
- day
- tame
- black
- tall
- narrow

4


B

- 1. short
- 2. white
- 3. night
- 4. bad
- 5. wild
- 6. wide

(5 marks)

Test 9

Study the picture given below. Re order these words to make meaningful sentences. First one is done for you.



- 1. a / It/ day/ is/ rainy.
..... It is a rainy day.....
- 2. fast/ people/ Some/ going/ are
.....
- 3. umbrellas/ women/ The/ are/ carrying
.....
- 4. little/ a/ The/ is/ girl/holding/ lady
.....
- 5. raincoat/ The/ man/ is/ wearing/ a
.....
- 6. a/ cap/ girl/ wearing/ The/ small/ is
.....

(1 x 5 = 5 marks)

Agaram.LK - Keep your dreams alive!

Agaram.LK - Keep your dreams alive!

Part II

- The First question is compulsory.
- Answer any other four questions.
- Altogether answer for five questions only.

01. Mention the following details related to the location of your school.

- | | | |
|-------|---|------------|
| (i) | Village/City - | (02 marks) |
| (ii) | Grama Niladhari Division - | (02 marks) |
| (iii) | Divisional Secretariat - | (02 marks) |
| (iv) | District - | (02 marks) |
| (v) | Province - | (02 marks) |
| (vi) | Mention three public places around your school. | (06 marks) |

02. (i) What is the key feature of climatic.

(02 marks)

(ii) Write the equipment used for measuring the following climatic features.

A - Rainfall

B - Temperature

C - Speed of the wind

D - Direction of the wind

(04 marks)

(iii) Write two changes which can be seen in the atmosphere before rain and mention three uses of rain.

(05 marks)

03. (i) Write two uses of plants.

(02 marks)

(ii) Write one use of the following animals.

A - Coucal

B - Bat

C - Dragonfly

D - Earthworm

(04 marks)

(iii) Mention three clubs or associations which help the development of your community and write two things done by them.

(05 marks)

04. (i) Mention two ways how the land can be utilized.

(02 marks)

(ii) Write four circumstances that the land is misused.

(04 marks)

(iii) Write a brief description of the environmental issues due to misuse of land.

(05 marks)

05. (i) Write two ways of polluting of water (02 mark)
- (ii) Write four issues related to the scarcity of water. (04 mark)
- (iii) State five steps that can be taken for water sustainability. (05 mark)
06. (i) Name the gas which is needed for respiration and the growth of plants. (02 mark)
- (ii) Mention four instances of air pollution. (04 mark)
- (iii) (a) Write three respiratory diseases caused by air pollution. (05 mark)
- (b) Write two harmful effects of acid rain. (05 mark)
07. (i) Write two reasons that has affected increased demand of energy. (02 marks)
- (ii) Write four things we can do to minimize the wastage of energy at home. (04 marks)
- (iii) Explain how waste can be disposed without harming the environment and describe how we can use them productively. (05 marks)

agaram.lk



Royal College - Colombo 07

Grade 6 – Third Term Evaluation – November 2019

Time : 2 hours


English Language

Name :- Grade : -..... Index number:-.....

Test 1

Match the pairs. Add a new word by using the given pictures.

- a. tall fed →
- b. red call → ball
- c. dish look →
- d. make fool →
- e. took wish →
- f. school take →




(1 × 5 = 5 marks)

Test 2

Look at the picture. Fill in the blanks with the prepositions given in the box. Use each preposition only once.

under in beside
 behind in on



1. There is a baby bird in the nest.
2. There are many leaves the branches.
3. A goat is the tree.
4. A boy is hiding the bush.
5. The bush is the tree.
6. A girl is sitting the tree.

(1 × 5 = 5 marks)

Agaram.LK - Keep your dreams alive!

Agaram.LK - Keep your dreams alive!

Test - 03

Use the most suitable adverbs in the blanks.

1. The dog satlazily..... in the shade of the tree.
2. The man grumbled while cleaning the table.
3. The girl solved the sums
4. He waited in the queue
5. The teacher explained the lesson
6. The soldier fought in the war

- lazily
- loudly
- patiently
- easily
- clearly
- bravely

(5 marks)

Test 4

Fill in the blanks using correct past tense verb into each sentence:

kick	comb	answer	listen	paint
------	------	--------	--------	-------

- (i) The boy... painted... a picture yesterday.
- (ii) The girl the teacher's question.
- (iii) My dad his hair this morning.
- (iv) My mom the house yesterday.
- (v) Last night we to music.
- (vi) My brother the ball.

(5 marks)

Test 5

Fill in the blanks using suitable words given in the box.

ice coffee,	enjoyed,	started,	till,	presents,	instruments,
classmates,	welcomed,	wished,	served		

A Party I attended

Last week I attended a party. It was Kamal's birthday party. The party 1) at 2p.m. and it went on 2) 7 p.m. Most of our 3) had attended the party. Kamal and his parents 4) me warmly. They 5) cakes, biscuits and sweetmeats. Also we were given 6) to drink. Two friends had brought musical 7) , so we sang songs. We 8) Kamal a happy birthday. We gave him 9) We 10) ourselves thoroughly on that day.

(5 marks)

Agaram.LK - Keep your dreams alive!

Agaram.LK - Keep your dreams alive!

Test 10

(A) Look at the pictures carefully and make the story.

The thirsty cat



So it dipped its paw into the jug.

The clever cat did this again and again. In the end all the milk was gone.

The cat was thirsty. **1**

The cat licked its paw and drank milk.

It found a jug half full of milk.

The neck of the jug was too narrow, so it could not reach the milk.

(1 × 5 = 5 marks)

(B) Match the describing words with the naming words. First one is done for you.

Describing words

- Rainy
- famous
- delicious
- silver
- leafy
- noisy

Naming words

- trees
- stars
- days
- actors
- children
- cakes

- | | |
|---------------|---------|
| 1. Rainy days | 4. |
| 2. | 5. |
| 3. | 6. |

(1 × 5 = 5 marks)

Test 11

Fill in the blanks with one of the words given in brackets.

(bark, howl, neigh, bleat, hum, his)

- (i) Suddenly, the dog began to
- (ii) Two or three bees started to near his ear.
- (iii) In the distance he could hear a wolf
- (iv) Have you ever heard a horse
- (v) A cobra reared his head at him and began to
- (vi) He could hear the sheep on the hill.

(1 × 5 = 5 marks)

Test : 13

Viking ships

The Vikings came across the North Sea to the British Isles from Norway, Sweden and Denmark. In those days many people were afraid of the sea, but the Vikings had made ships which were able to sail across rough seas safely.

The Viking warships, called 'longships', were wide and flat-bottomed. So that they could sail close to the beaches, and had a large sail which meant that they could travel very quickly. As the compass had not been invented, the Vikings navigated by looking at the stars or sun. When the ships were in battle, they would have a dragon head fixed to the front of the boat, or the prow. This was taken off in port because the sailors thought it brought bad luck.

The Vikings became bolder as their ships became faster. They sailed up the River Thames and attacked London. They also sailed along the River Seine in France to attack Paris.

As well as longships, the Vikings had 'traders' and 'ferries'. We know this from the remains of vessels found buried in the mud.

1. Where did the Vikings come from?

2. Were the Vikings afraid of the sea? State reasons for your answer.
.....

3. The Vikings came across.

- (i) Denmark
- (ii) Sweden
- (iii) North Sea

4. Write two advantages of long ships.

- (i)
- (ii)

5. Another name for long ship is

6. (i) Compass had been invented during Viking era.

(ii) Stars and the sun brought them bad luck.

7. Why did the Vikings become bolder?

8. Find similar words from the paragraph for the following words.

- (i) scared -
- (iii) battle -

9. How do we come to know about 'traders' and 'ferries'?

.....
.....

10. Write few lines about Vikings.

.....
.....

(10 marks)

Agaram.LK - Keep your dreams alive!

Agaram.LK - Keep your dreams alive!

