



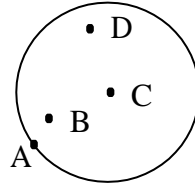
Grade 6

Mathematics

Unit:1- Circles

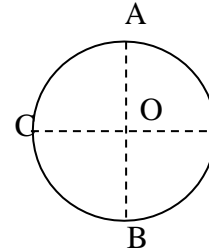
- Answer all questions.

1) What is the center of the circle?

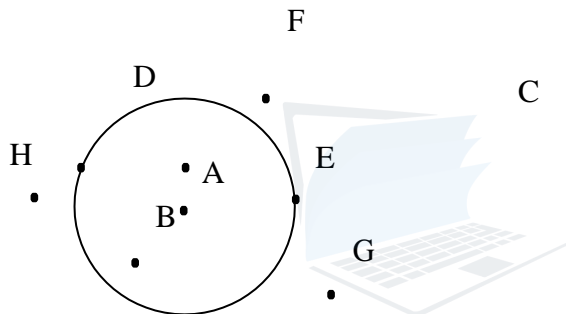


2) Fill in the blanks.

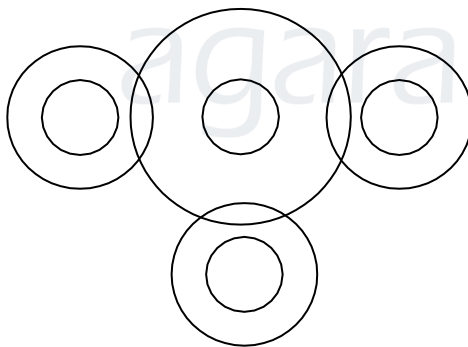
OA = = =



3) Name the points inside the circle.

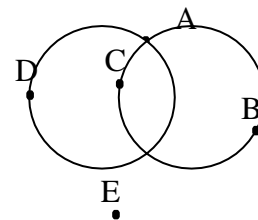


4) How many circles are there in the diagram?



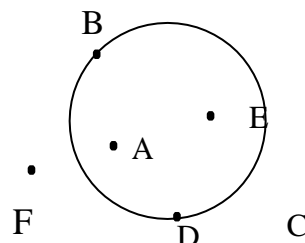
5) a)..... is the common point for the two circles.

b)..... is the point outside the circles.



6) Which letters indicate positions on the circle.

7) Select various items which have circular shape, and using them draw several circles which are different in size to each other.



Prepared by Ms. T. R. N. Niwanthie



agaram.lk