



PROVINCIAL DEPARTMENT OF EDUCATION - NORTH WESTERN PROVINCE

SECOND TERM TEST - 2019

Grade 06

WESTERN MUSIC

Two Hours

Name / Index No. :

Answer all questions on this paper itself.

Paper I

- **Underline the correct answer.**

01. Which one of the following is a Pleasant sound ?

- (a) Bomb Blast (b) Sound of Crackers (c) A frog Croaking (d) Bird Singing

02. Which of the following is a Social function ?

- (a) Ramazan (b) Christmas (c) Wedding (d) Vesak

03. What is sung during Vesak Season ?

- (a) Hymns (b) Bhakthi Gee (c) Carols (d) Bhajan

04. What is a Sri Lankan Drum ?

- (a) Bass Drum (b) Geta Beraya (c) Kettle Drum (d) Tabla


05. Which of the following is a National festival ?

- (a) Vesak (b) Christmas (c) Ramazan (d) Sinhala & Hindu New Year

06. How many spaces are there in a Great staff ?

- (a) 8 (b) 9 (c) 10 (d) 11

07. What is a Crotchet rest ?

- (a)  (b)  (c)  (d) 

08. Who is the Composer of "Air on G String" ?

- (a) Brahms (b) J.S. Bach (c) Beethoven (d) Scot Joplin

09. How many Count are there in the following rest ? 

- (a) 1 (b) 2 (c) 3 (d) 4

10. Which drum is used in a Wedding Ceremony ?

- (a) Yak Beraya (b) Daula (c) Geta Beraya (d) Thammattama

● **Match A and B**

A		B
11. Independence Day	()	(a) Social Function
12. Hindus	()	(b) Hymns
13. Birthday party	()	(c) National Festival
14. Christians	()	(d) Ramazan
15. Muslims	()	(e) Thai Pongal

● **Fill in the blanks using the given words.**

(White and Black / Silence / One / Five - Four / Right)

16. The crotchet has count (a).
17. The stave has lines andspaces.
18. The notes played always. But the rests indicate
19. The clef that starts on 2nd line shows music for hand.
20. The Piano has keys.

(20 marks)

Part - II

- Answer question No. 01 and 02 others.

01. (a) Write down the correct symbol from the box given for each label. (½ x 6 = 3 marks)

Double bar line / Bar line / Stave / Notes / Rest / Clef

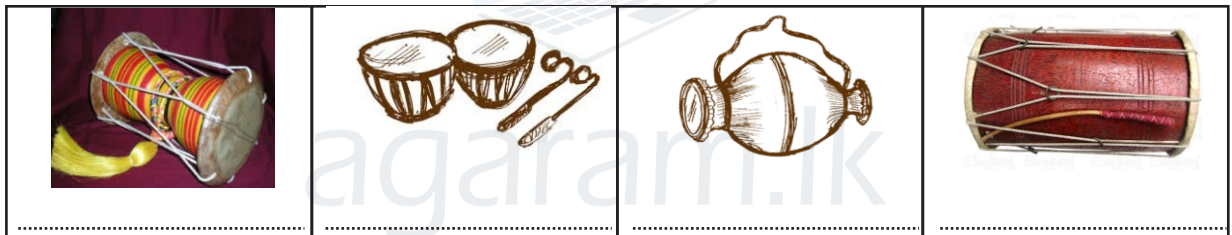
(b) Write the following notes. (4 marks)

G in a space E in a space D on a line F on a line

(c) Name these time name. (3 marks)

02 (a) Name the following Instruments. (4 marks)

Bummediya / Davula / Udekkiya / Thammattama



(b) Write first 02 lines of the School Song in your school. (1 mark)

.....

(c) Write whether these environmental sounds are **high** sounds or **low** sounds. (2 marks)

- The bark of a dog
- Birds chirping

(d) Match **A** to **B** (3 marks)

A () i. B A D

() ii. E A D G E

() iii. E G G

03 (a) Name the following notes.



(b) Write whether these sounds Pleasant or Unpleasant. (2 marks)

- i. Singing of birds
- ii. Bomb blast

(c) Draw a Key Board and write **C F G B** on the correct keys. (1/2 x 4 = 2 marks)

(d) Arrange the following jumbled sentences and re-write the following. (2 marks)


Merrily, merrily, merrily, merrily
 Row row row your boat
 Life is but a dream
 Gently down the stream

.....

(e) Name 02 Social functions where music could be heard. (2 marks)

.....

04. (a) Write a rest, same as the previous notes. (3 marks)



(b) Fill in the blanks.

- i. Bass clef notes are played by hand.
- ii. There are Clefs used in music.
- iii. Another name for stave is
- iv. There are lines and spaces in a staff. (5 marks)
- v. We write music on a (2 marks)

(c) Draw one Social function and name it.



PROVINCIAL DEPARTMENT OF EDUCATION - NORTH WESTERN PROVINCE

SECOND TERM TEST - 2019

Grade 06

WESTERN MUSIC

Name / Index No. :

PRACTICAL TEST

- | | |
|--|----------|
| 01. Singing a suitable Song | 10 marks |
| 02. Recorder - G. A. B | 10 marks |
| 03. Piano / Key board any suitable music | 10 marks |
| 04. Beating time (Duple / Triple) | 10 marks |
| 05. Identify notes on key board | 10 marks |



agaram.lk