

සියලුම හිමිකම් ඇවිරිණි
All Rights Reserved



PROVINCIAL DEPARTMENT OF EDUCATION - NORTH WESTERN PROVINCE

SECOND TERM TEST 2019 GEOGRAPHY

Grade 06

Two hours

Name / Index No. : _____

PART - A

Answer all the questions.

- Select the most suitable word and write it on the given space for question No. 01 to 05.

- 01 Northern Province of Sri Lanka consists with districts. (3 / 5 / 4)
- 02 The gas is necessary for growing plants. (Oxygen / Nitrogen / Hydrogen)
- 03 is a migrant bird. (Bat / Parrot / Indian pitta)
- 04 Cultivation of is done in plains of Sri Lanka.
(Tea / Coconut / Rubber)
- 05 domestic industries are spread all over Sri Lanka.
(Large scale / Small scale / Middle scale)

- If the following sentences are correct put (✓) if not put (✗) for question No. 06 to 10.

- 06 Issuing season tickets in transportation is provided by the government in free of charge. ()
- 07 Distance and location of geographical features can be shown clearly in a map than in a picture. ()
- 08 We receive rain through condensation of water vapour. ()
- 09 Knowing weather forecast is more important for school students. ()
- 10 North East is located between West and North. ()

● **Underline the most suitable answer for question No. 11 to 15.**

11 The province that has not a coastal area in Sri Lanka is,

- (1) Northern province (2) North Western province
(3) Sabaragamuwa province (4) Western province

12 The natural harbour in the Eastern province of Sri Lanka is,

- (1) Hambanthota (2) Trincomalee (3) Galle (4) Colombo

13 The benefit that is gained from plants to the environment is,

- (1) can get fuel (2) provide food & medicine
(3) clean the atmosphere (4) provide timber for furniture

14 This is not necessary to show the identity of a school,

- (1) Name of the school. (2) Electorate that the school belongs.
(3) Education zone. (4) Education division.

15 A feature that can not be seen in a map is,

- (1) three dimensional (2) colourful
(3) plain figures (4) showing the direction

● **Write the correct answer on the given space for question No. 16 to 20.**

16 As the child grows, the becomes the formal institution that provides education.

17 The department of meteorology is located at Colombo.

18 When there are no clouds, the sky is in colour.

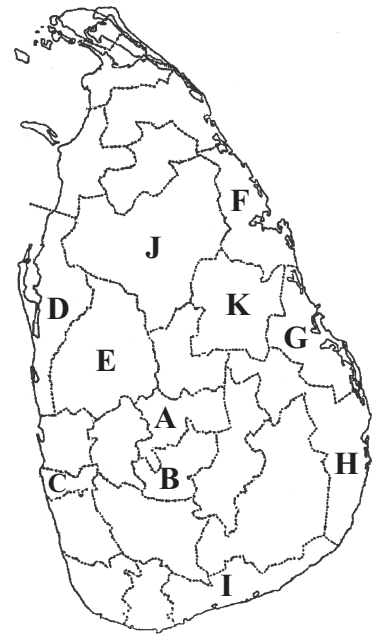
19 The provides temperature and heat.

20 The spreads a disease called plague.

Answer five questions including the first question.

(01) (a) Study the given map of Sri Lanka and answer the questions.


- (i) Write the letter of the district that your school is located in. (02m.)
- (ii) Write the letters of the smallest and the largest districts in Sri Lanka respectively. (02m.)
- (iii) Letter F shows a district that belong to the Eastern Province. Name it. (02m.)
- (iv) Write the names of 02 provinces that coastal areas can be seen in Sri Lanka. (02m.)
- (v) Name 02 provinces that only two district belong to a province. (02m.)



(b) Following is the location of your school in the divisional administrative hierarchy. Fill in the blanks. (06m.)



02 Following are some equipments that measure same weather elements. Answer the following questions using it.



X



Y



Z

- (i) Name the equipment that is shown in letter X. (02m.)
- (ii) What is the weather element that is measured by the equipment shown by letter Y?(02m.)

(iii) Name the equipment shown in letter Z and write the weather element that is measured by this equipment. (04m.)

(iv) Write the units that measure the weather elements shown by letters X, Y, Z.

X - Y - Z - (03m.)

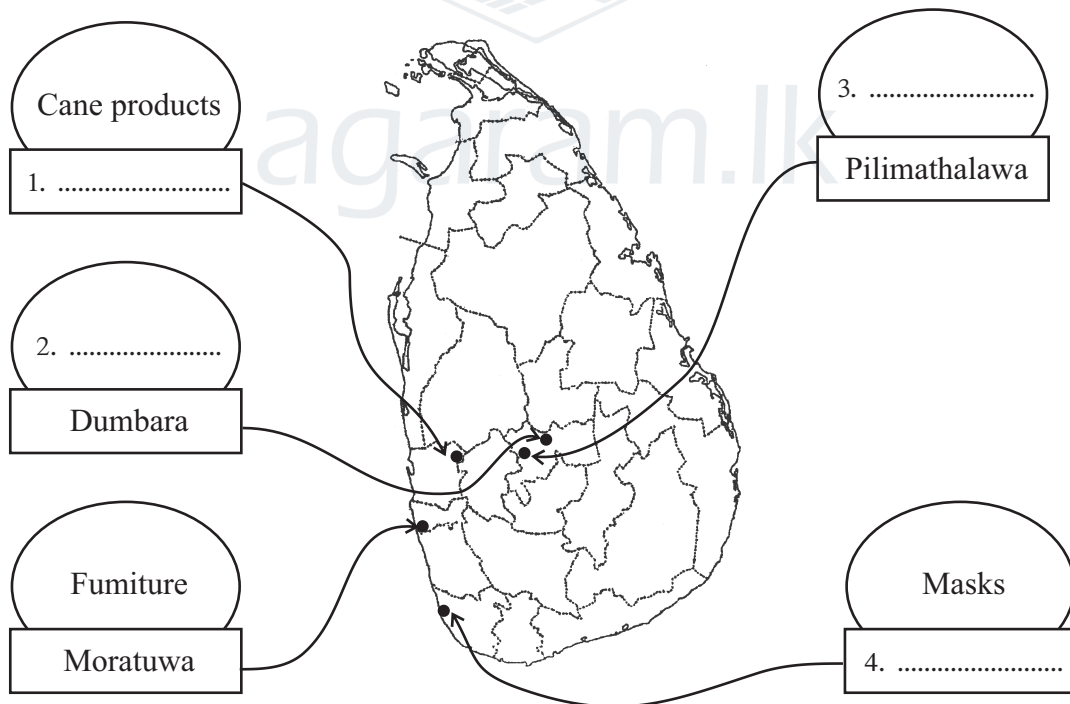
03 (i) Write 03 occasions that the land is used in an improper manner by the man. (04m.)

(ii) Complete the following table using given words.

(Use rain water tanks / Soil infertility / air / plant trees / clearance of forests / water / soil erosion / occur breathing problems / failure of agricultural activities) (07m.)

Elements of the natural environment	Improper human activities	Results of them	Steps that can be taken minimize the harms/ pollution
1.	Pollute water	4.	6.
2.	3.	5.	7.

04 (i) Fill in the blanks using the map based on location of several industries based on traditional technological skills. (08m.)



(ii) Name one crop each that are cultivated in the following areas.


Plain areas -

Mountainous areas -

River valleys -

(03m.)

05 (i) Study the given pictures A, B, C & D shown religious places and name them. (04m.)



A

B

C

D

(ii) Write the religions that the people who go to above religious places observe respectively.

A

B

C

D

(04m.)

(iii) Write 03 each religious festivals that above selected three religions celebrate. (03m.)

06 (i) Match following geographical features correctly. (06m.)

Highlands

Parks

Roads

Forests

Rivers

Cultivated crops

Man made features

Natural features

(ii) Write one each use of following animals to the man. (05m.)



A



B



C



D



E

07 Complete the puzzle.

Down

1. A district in the Eastern province.
2. The condition of the atmosphere that prevails for a short period of time in a particular area.
3. The direction between south and east.
4. The wind that blows with a lesser speed.
5. The name for the process of make water vapour from leaves of plants.
6. These are occured during the rainy season in mountainous areas.
7. These are helped to make a province.

Across

8. An animal that help to the farmers.
9. An element of weather.
10. An equipment that measure the speed of the wind.
11. Can identify the nature of the clouds from this.

