

සියලුම හිමිකම් ඇවිරිණි / All Rights Reserved


 චයම් පළාත් අධ්‍යාපන දෙපාර්තමේන්තුව Provincial Department of Education  
 චයම් පළාත් අධ්‍යාපන දෙපාර්තමේන්තුව Provincial Department of Education  
**Provincial Department of Education - NWP**  
 චයම් පළාත් අධ්‍යාපන දෙපාර්තමේන්තුව Provincial Department of Education

**තෙවන වාර පරීක්ෂණය - 6 ශ්‍රේණිය - 2019**

**Third Term Test - Grade 6 - 2019**

**Name :** ..... **Geography** **Time :** 02 hours

**Part I**

I Answer all the questions.

I Select the most suitable answer and write it on the given space for question no. 01 to 05.

01. A ..... constitutes a collection of several Grama Niladhari Divisions.  
(Province, District, Divisional Secretariat)
02. .... is the largest district in Sri Lanka.  
(Colombo, Anuradhapura, Kandy)
03. .... is an element of weather.  
(Temperature, Relief, Forests)
04. .... is an effect of irregular use of land.  
(Reforestration, Soil erosion, Soil conservation)
05. .... is occurred due to occurring acid rains.  
(Evaporation, Create aquatic creatures, Soil infertility)

I If the following statements are correct put '3' if not put '6' for question no. 06 to 10.

06. You can save electricity by, increasing the number of times the door of the refrigerator is opened. ( )
07. We can identify the direction without using the compass. ( )
08. Decrease in temperature in the northern part of Sri Lanka is due to the influence of the dry winds that blow from the Indian Sub- continent. ( )
09. The province is the largest administrative unit in Sri Lanka. ( )
10. Weather is the condition of the atmosphere that prevails for a short period of time in a particular area. ( )

Agaram.LK - Keep your dreams alive!

Agaram.LK - Keep your dreams alive!

1. Select the most suitable answer and write the letter of the answer on the given space for question no. 11 to 15.

- |              |                    |                    |
|--------------|--------------------|--------------------|
| A - Clouds   | B - Transpiration  | C - Photosynthesis |
| D - Rainfall | E - Surface runoff | F - Breeze         |
| G - Storm    | H - Drainage       | I - Evaporation    |

11. The name for evaporation from plants. ( )
12. The wind that blows with a lesser speed. ( )
13. These are created by condensation of water vapour. ( )
14. The process that the water on land turns into vapour due to the heat of the sun. ( )
15. A main element of weather. ( )

1. Write the correct answer on the given space for question no. 16 to 20.

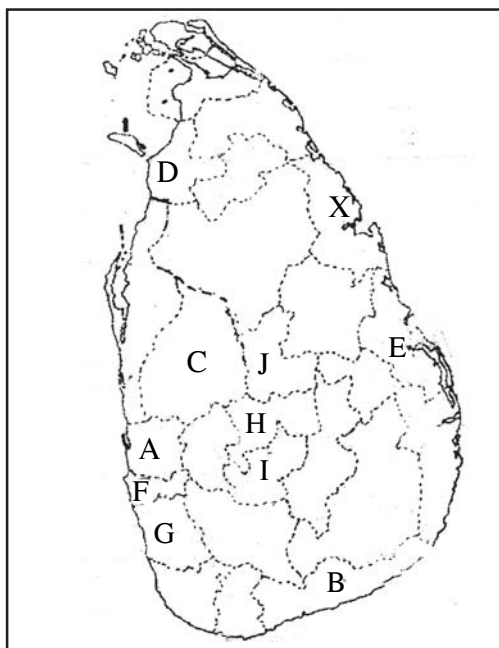
16. The ..... provides temperature and heat.
17. The speed of the wind is measured in .....
18. Producing masks in ..... is famous domestic industry in Sri Lanka.
19. The result of air pollution affect man as well as animals and ..... in a harmful manner.
20. Sri Lanka belongs to the continent of ..... which is the largest continent in the world.

**Part II**

1. Answer 5 questions including the first question.

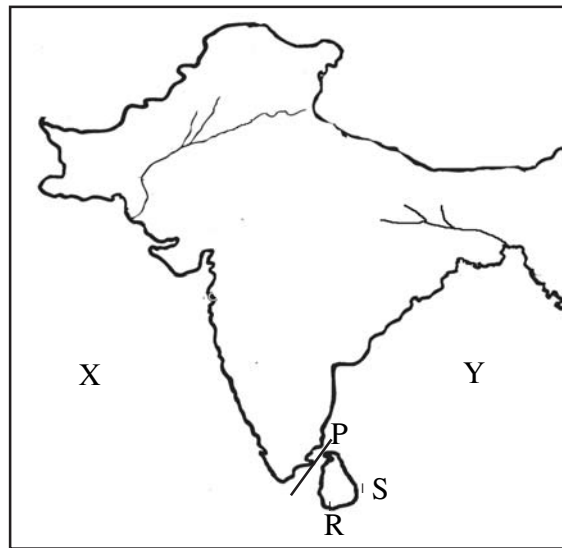
01. Study the given district map of Sri Lanka and answer the questions given below.

(A)



- (i) Name the district shown by letter X and write the famous Hindu temple located there. (2 Marks)
- (ii) Name the main administrative city of Sri Lanka and write the letter of the district that this city is located. (2 Marks)
- (iii) Name the district shown by letter B and write the newly built international harbour located in this district. (2 Marks)
- (iv) Write the letter that Kandy is shown by and write the name of the Buddhist religious place located there. (2 Marks)

(B) Study the given map and answer the given questions.



- (i) Name the sea shown by letter X and the bay shown by letter Y. (2 Marks)
- (ii) Write the name of the narrow sea strip that is separated India and Sri Lanka and write the letter that it is shown. (2 Marks)
- (iii) Name the point that is related to measuring length of Sri Lanka and write the letter that it is shown. (2 Marks)
- (iv) What is the direction that Sri Lanka is located to India? (2 Marks)

02. (i) Following are some islands in the world and the oceans that they are located. Fill the grid.

Island	Ocean that it is located
Japan	(1) .....
Newzeland	(2) .....
(3) .....	Indian Ocean
British	(4) .....

(4 Marks)

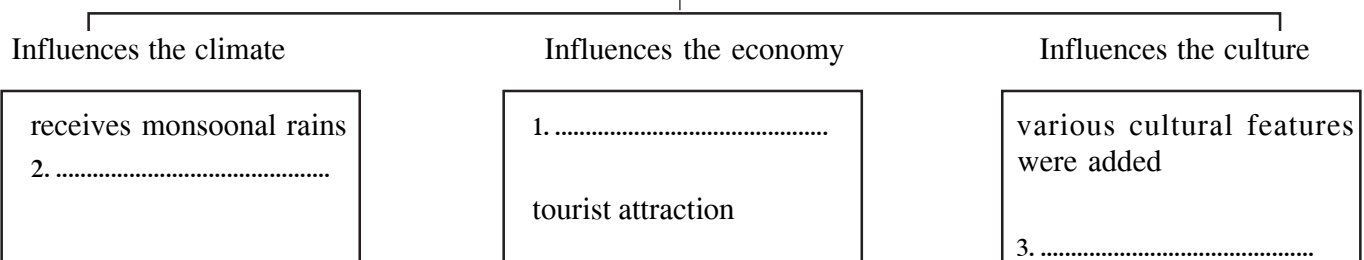
(ii) Fill in the blanks using the relative location of Sri Lanka.  
 Sri Lanka is located to the (1) ..... of the Asian continent towards the (2) ..... of the Indian ocean and to the west of (3) ..... and to the East of the (4) .....

(4 Marks)

(iii) Fill in the blanks regarding the location of Sri Lanka and their affects using the given answers.

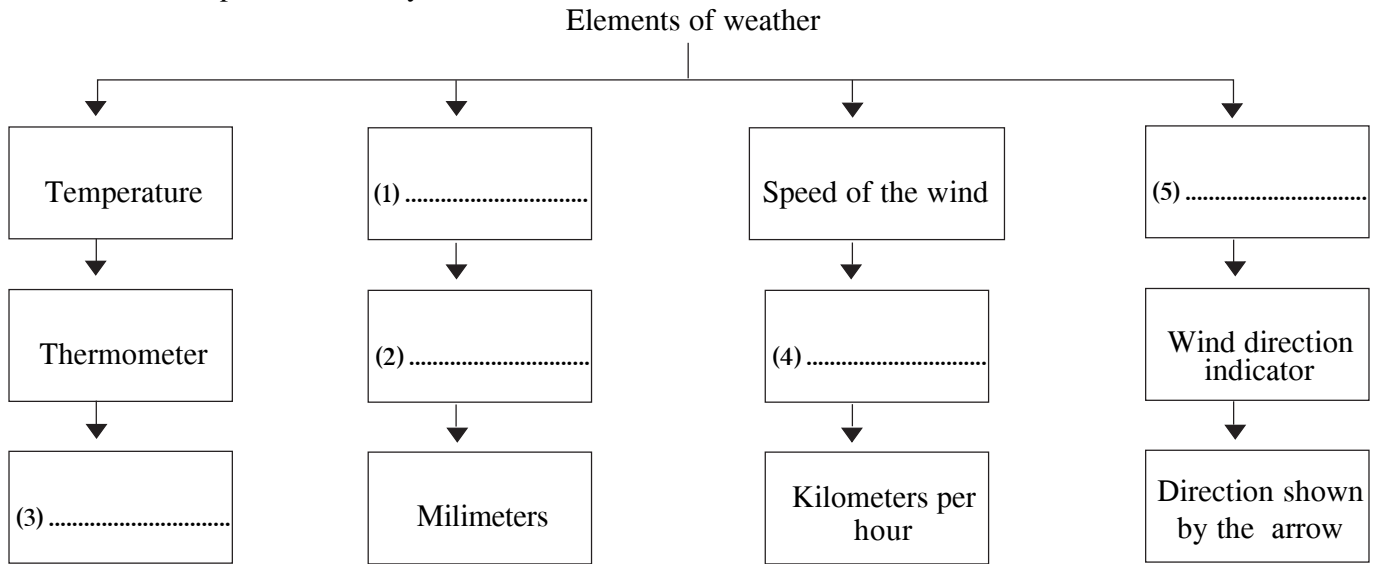
(3 Marks)

Location of Sri Lanka



**(temperature is moderated, located in the center of naval route, presence of various religions)**

03. (i) Following chart shows the weather elements, equipments and unit that they are measured. Complete it correctly.



(5 Marks)

(ii) Following pictures show the houses located in different environments. Match them with the given statement and write the letter of the picture on the given space.




A



B



C



D



E



F

(i) The house located in a rural environment.

(ii) The house located in an urban environment.

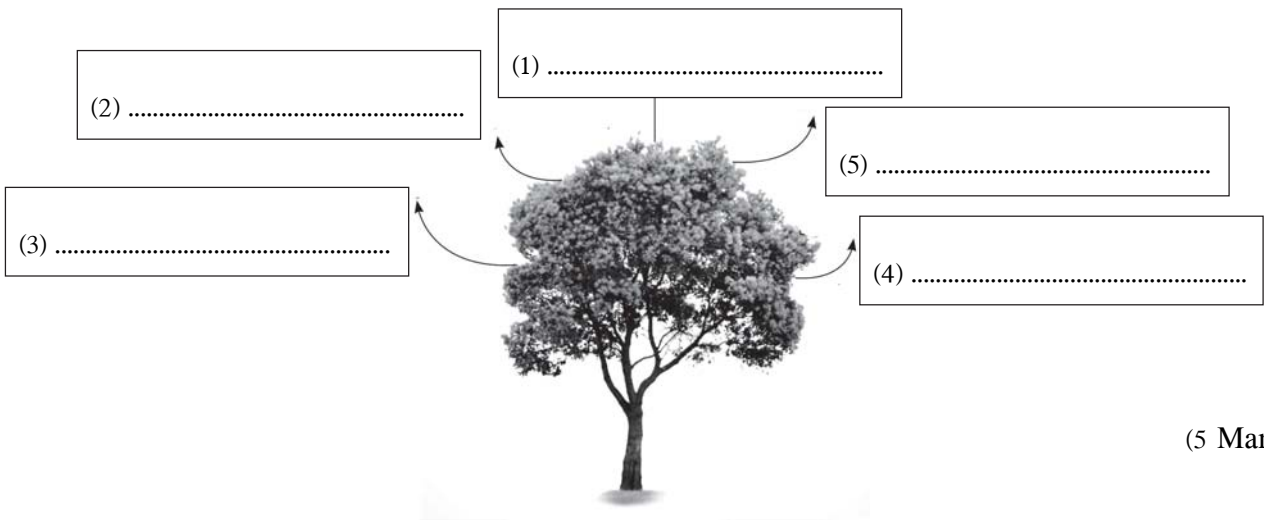
(iii) The house located on a high land.

(iv) The house located on a slope.

(v) The house located in a coastal environment.

(vi) The house located in an estate environment.

04. (i) Write 5 uses of plants in the following picture.



(5 Marks)

(ii) Match the animal and the statements given and write the letter of the animal in the given boxes.



A



B



C



D

- (1) Helps in pollination.
- (2) Spreads a disease called plague.
- (3) Nocturnal animal.
- (4) It is poisonous that harm man.

(4 Marks)

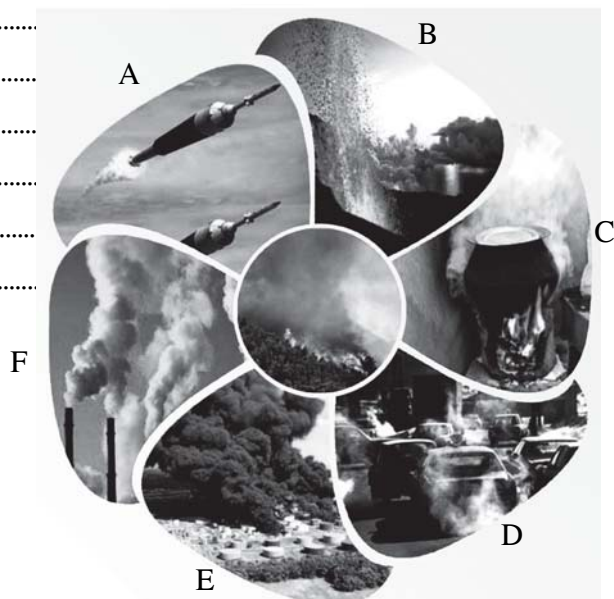
(iii) Name 2 migrant birds that come to Sri Lanka.

(2 Marks)

.....

05. (i) Following are the occasions of air pollution. Name them respectively.

- A .....
- B .....
- C .....
- D .....
- E .....
- F .....



(6 Marks)

