

සියලුම හිමිකම් ඇවිරිණි/ முழுப் பதிப்புரிமையுடையது / All Rights reserved

වයඹ පළාත් දෙපාර්තමේන්තුව වැඩිමල් මාකාණ කல்විත්ති තිணைக்களம் Department of Provincial Education - NWP වයඹ පළාත් දෙපාර්තමේන්තුව වැඩිමල් මාකාණ කல்විත්ති තිணைக்களம் Department of Provincial Education - NWP

වයඹ පළාත් දෙපාර්තමේන්තුව වැඩිමල් මාකාණ කல்විත්ති තිணைக்களம் Department of Provincial Education - NWP වයඹ පළාත් දෙපාර්තමේන්තුව වැඩිමල් මාකාණ කல்විත්ති තිணைக்களம் Department of Provincial Education - NWP

වයඹ පළාත් දෙපාර්තමේන්තුව වැඩිමල් මාකාණ කல்විත්ති තිணைக்களம் Department of Provincial Education - NWP වයඹ පළාත් දෙපාර්තමේන්තුව වැඩිමල් මාකාණ කல்විත්ති තිணைக்களம் Department of Provincial Education - NWP

වයඹ පළාත් දෙපාර්තමේන්තුව වැඩිමල් මාකාණ කல்විත්ති තිணைக்களம் Department of Provincial Education - NWP වයඹ පළාත් දෙපාර්තමේන්තුව වැඩිමල් මාකාණ කல்විත්ති තිணைக்களம் Department of Provincial Education - NWP

<b>Grade 6</b>	<b>First Term Test - 2019</b>	<b>61</b>	<b>E</b>	
Name .....				<b>2 hours</b>
<b>GEOGRAPHY</b>				
<b>Important : • Answer all the questions</b>				

**Part I**

- **Select the most suitable answer and write it on the given space for question no 1 to 5.**
01. When you stand facing the rising sun, stretching your hands, your right hand points to the direction of the ..... (North/ South/ West)
  02. The wind that blows with a lesser speed is called a ..... (Storm/ Cyclone/ Breeze)
  03. The historical cities like Anuradhapura and Polonnaruwa are in the ..... Province. (North Central/ Central/ Uva)
  04. The ..... provides temperature and heat for the planet Earth. (Stars/ Sun/ Planets)
  05. The direction ..... is located between the North direction and the West Direction. (South West/ South East/ North West)
- **If the following statements are correct put (✓) if not put (x) for question no 6 to 10**
06. The Department of Meteorology is located at Buddhaloka Mawatha, Colombo. ( )
  07. Indicating the North in a sketch map is not necessary. ( )
  08. Weather condition is not changed according to the time and the area. ( )
  09. Before rain you can see thick dark clouds in the sky. ( )
  10. The branches of trees bend in the direction of wind. ( )
- **Underline the most suitable answer for question no 11 to 15.**
11. What is the district that belong to the Western Province of Sri Lanka?
 

1. Badulla	2. Ampara
3. Kalutara	4. Kegalla
  12. Who can engage their activities successfully with the knowledge about the weather?
 

1. Teachers	2. Doctors
3. Fishermen	4. Carpenters

Agaram.LK - Keep your dreams alive!

Agaram.LK - Keep your dreams alive!

13. What is the result due to the lack of rainfall?
- |               |             |
|---------------|-------------|
| 1. Flood      | 2. Cyclones |
| 3. Landslides | 4. Drought  |
14. What is the equipment that measure the direction of the wind?
- |                |                             |
|----------------|-----------------------------|
| 1. Speedometer | 2. Anemometer               |
| 3. Thermometer | 4. Wind Direction Indicator |
15. What is the District that can be seen mist abundantly in Sri Lanka?
- |               |                 |
|---------------|-----------------|
| 1. Monaragala | 2. Vavunia      |
| 3. Mannar     | 4. Nuwara Eliya |

• **Select the Suitable word from brackets and fill in the blanks for question no 16 to 20.**

The Grama Niladhari Division is the smallest administrative division in Sri Lanka. The Grama Niladhari Division is made up of one or more villages. Every Grama Niladhari Division has a 16. .... and a 17. .... There may be Several Grama Niladhari Divisions in a 18. .... Division. Two or more 19. .... make a 20. .... which is the largest administrative Division in the Country.

(Districts, Name, Province, Number, City, Divisional Secretariat, Assistant Government Agent )

(2x20=40 marks)

**Part II**

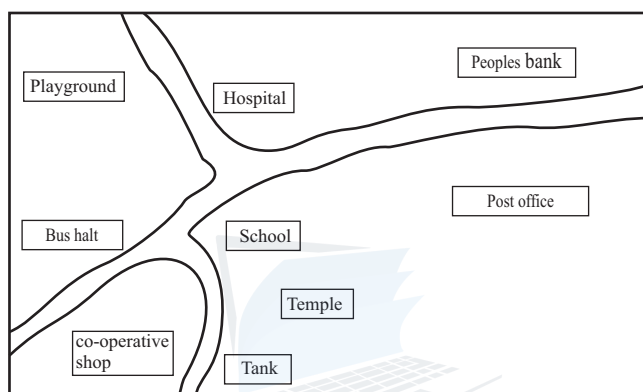
• **Answer 5 questions including the first question.**

01. (a). **Answer the following questions using the given map of Sri Lanka.**



- i. What is the letter of the district that your school is located? (1 mark)
- ii. Write the letters of the largest District and the smallest District of Sri Lanka.  
 The largest District .....  
 The smallest District ..... (2 mark)
- iii. What is the letter that shows a District belongs to the Southern Province? (1 mark)
- iv. Write 2 districts that are bounded to the Kurunegala District. (2 mark)
- v. Name the province that the district shown by letter D belong to (2 mark)
- vi. What is the province that has the highest number of districts belong to (2 mark)

(b) Following picture shows the sketch map of the samanpura village. Answer the following questions using this sketch map.



- i. Name a building that is located in the North of the school. (1 mark)
- ii. Name a building that is located in the South of the school. (1 mark)
- iii. Name a building that is located to the West of the school. (1 mark)
- iv. What is the direction that the post office is located to the school. (1 mark)
- v. What is the direction that the hospital is located to the bus halt. (1 mark)
- vi. What is the building that is located to the south of the peoples Bank? (1 mark)

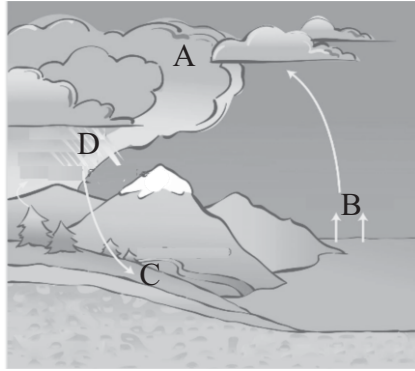
02. i. Fill the grid using the information on weather (8 marks)

Element of the Weather	Equipment that measure	Unit that measure
1. ....	2. ....	Millimeters
Temperature	3. ....	4. ....
Speed of the Wind	5. ....	6. ....
7. ....	8. ....	Direction shown by the arrow

- ii. Write 2 uses to man from knowing the weather report. (4 marks)

03. i. Following picture shows the process of precipitation. Name A,B,C and D respectively.


(8 marks)



ii. Write 3 uses of rain to man

(3 marks)

04. i. Following pictures show the various occasions of weather. Name A, B, C and D respectively.



ii. Read the following weather report carefully and answer the questions.

During the last 24 hours ending at 9 a.m. today the maximum rainfall of 2500mm was reported from Watawala. While the maximum temperature of 32°C was reported from Polonnaruwa. The minimum Temperature of 12°C was reported from Nuwara Eliya. There will be winds from South west and it may be 120 kilometer per hour and the coastel areas around the island will be rough. There will be heavy rains in the west. South and Central hills during the next 24 hours.

- According to the weather report, write the maximum and minimum temperature? (2marks)
- According to the weather report, write the maximum rainfall (1 marks)
- What is the district that reported the minimum temperature? (1 marks)
- What is the area that receives the highest rainfall? (1 marks)
- What is the direction that the wind blows to the country? (1 marks)
- What is the weather forecast revealing from this weather report? (2 marks)

05. i. Study the given pictures which show the houses located in different environment and match the number of the picture with the caption given below and write the correct number in the relevant box provided. (5 marks)



- The house located in an urban environment
- The house located on a slope
- The house located on a plain
- The house located in a slightly hilly land
- The house located in a coastal environment

ii. Using the given natural and man-made features in the brackets write them separately. (forests, highlands, buildings, rivers, parks, cultivated lands) (6 marks)

Natural features	Man-made features
.....	.....
.....	.....
.....	.....

06. Using given clues complete the puzzle.

**Down**

1. An institution that provides formal education.
2. Clouds are formed by condensation of this.
3. The largest administrative unit of Sri Lanka.
4. The name for the process of the rising up the water vapour.
5. A district of the Uva province.
6. The equipment that measure the speed of the wind.
7. A main element of winds

**Across**

1. We can know the nature of the clouds through this.
2. The condition of the atmosphere that prevails for a short period of time in a particular area is
3. It helps in the propagation of seeds.
4. An equipment that uses to find the direction correctly. (11 marks)