



PROVINCIAL DEPARTMENT OF EDUCATION - NORTH WESTERN PROVINCE
SECOND TERM TEST 2019

Grade 07 INFORMATION AND COMMUNICATION TECHNOLOGY

1 ½ hours


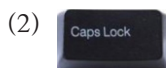
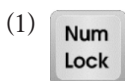
Name / Index No. :

- Answer all questions.

PART - A

- Underline the correct answer.

01. is used to create an empty space between two words. Eg: "Thank You".
(1) Enter (2) Space (3) Tab (4) Ctrl
02. technology was used by First Generation,
(1) Integrated circuit (2) Vacuum tube (3) Transistor (4) Microprocessor
03. The device used to write letters on a screen.
(1) Mouse (2) Printer (3) Keyboard (4) Scanner
04. In Programming, Are used to store a value in memory temporarily.
(1) Control structure (2) Flow charts (3) Variables (4) Algorithms
05. Which is not a operating system?
(1) MS DOS (2) Microsoft Office
(3) Microsoft Windows (4) MAC OS
06. Algorithm that operate again and is called
(1) sequence (2) selection (3) repetition (4) choice
07. The act of typing quickly and accurately without looking at the keys is called typing.
(1) touch (2) speed (3) easy (4) flexible
08. When is enabled, you can use the numbers on the keypad.
(1) Num Lock (2) Scroll Lock (3) Caps Lock (4) esc
09. Examples for Presentation Software,
(1) Open Office impress (2) MS Word
(3) Paint (4) Photoshop
10. When the key is pressed once capital letter's are typed.



(2 x 10 = 20)

- If the following sentences are true then put "✓" mark or false then put "X" mark in given space.

- The Enter key is used to send the cursor to the next line. (.....)
 - The easiest way to delete files and folders is to locate the item you want to delete, highlight it by clicking on the file or folder once, and then press the **Ctrl** key on the keyboard. (.....)
 - Fourth generation is smaller size when compared with the third generation. (.....)
 - If remove the shoes when entering the computer lab. We can put the computer lab with clean environment. (.....)
 - Microsoft Power Point is a word processing software published by Microsoft. (.....)
- (2 x 5 = 10)

- Select the suitable answer for "A" from the "B" section.

"A"

"B"

- | | |
|---|---------|
| 16. This OS used in smart mobile phones. | ALU |
| 17. Files created should be to reuse them later. | CCTV |
| 18. Errors in a programme are called | Android |
| 19. CCTV camera is using to protect computers from theft. | bugs |
| 20. Mathematical and logical functions are performed in the | Save |
- (2 x 5 = 10)

PART - B

- Answer All Questions.





(01) Consider the following storage devices and Correctly insert the above devices into following table.

- | | |
|--------------------|-------------|
| Hard disk | CD |
| External hard disk | Memory card |
| DVD | Pen drive |

Magnetic media devices	Optical media devices	Solid state media devices

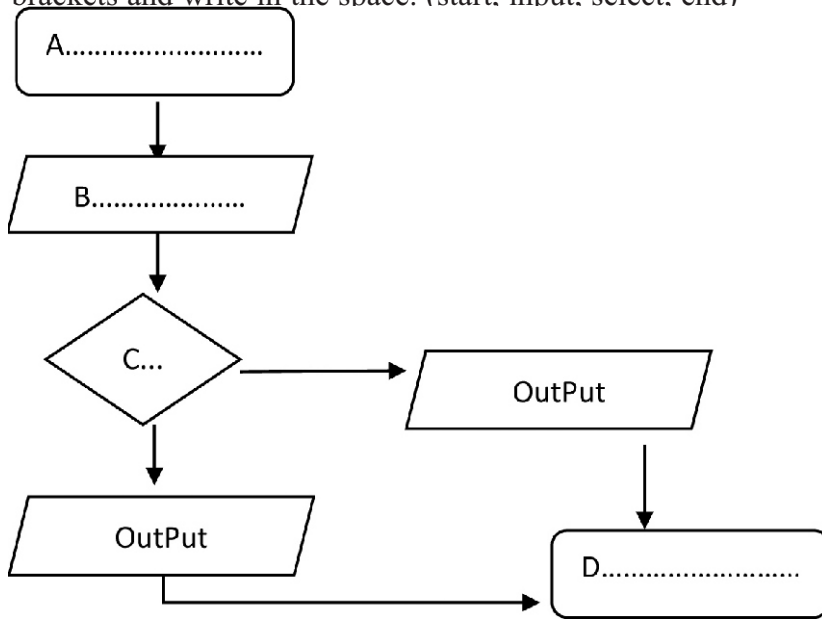
(2 x 6 = 12)

(02) Write the answers when type the following keys on keyboard.

-  =.....
 -  =.....
 -  =.....
 -  =.....
- (3 x 4 = 12)

(02)

(03) (i) The situations represented by A,B,C,D from the following flow chart. Select from the brackets and write in the space. (start, input, select, end)



(1.5 x 4 = 6 marks)

(ii) Draw flow chart for Finding the area and perimeter of a rectangle.

(06 marks)

(04) (i) Write two tasks performed by the operating system. (0 2 marks)

- (1)
- (2)

(ii) What is the three main parts of CPU. (0 6 marks)

- (1)
- (2)

Explain one of them,

(04 marks)

.....

.....

.....

.....

.....

(05) (i) Give 3 steps that can be taken to protect the computer from physical harm.

- (1)
- (2)
- (3)

(2 x 3 = 06 marks)

(ii) Write down three good habits you should have in your computer lab.

- (1)
- (2)
- (3)

(2 x 3 = 06 marks)

