

සියලුම හිමිකම් ඇවිරිණි/ முழுப் பதிப்புரிமையுடையது / All Rights reserved

වයඹ පළාත් අධ්‍යාපන දෙපාර්තමේන්තුව  
 Department of Provincial Education - NWP  
 வடமேல் மாகாணக் கல்வித் திணைக்களம்  
 Department of Provincial Education - NWP

<b>Grade 7</b>	<b>First Term Test - 2019</b>	<b>61</b>	<b>E</b>
----------------	-------------------------------	-----------	----------

Name ..... **GEOGRAPHY - I** **2 hours**

**Important :** ● **Answer all the questions**

- **Answer all the questions**
  - **Write the most suitable answer on the given space for question no 01 to 05**
01. The surface area of the Earth is ..... million km<sup>2</sup> (510 / 610 / 560)
  02. Longitude 180<sup>0</sup> is used to draw the ..... (Greenwich line / Date line/ equator)
  03. 71% of the surface of the Earth is covered by ..... (water/ land/ oceans)
  04. The second largest continent among the continents is the continent of .....  
(Africa / North America / South America)
  05. The ..... extends up to 12 nautical miles from the coast.  
(Exclusive Economic zone/ Territorial Sea Limit/ Contagious sea)
- **If the following statements are correct put (✓) if not put (✗) for question no 6 to 10**
06. Latitudes are drawn from East to West and parrell to the equator. ( )
  07. The Earth is a spherical object and it is a full sphere. ( )
  08. The International Date Line is a straight line . ( )
  09. Showing the location of a country with reference to longitudes and latitudes is called the specific location. ( )
  10. Sri Lanka which is an island receives a uniform rainfall throughout the year ( )
- **Underline the most suitable answer for question no 11 to 15**
11. The name for 66 1/2<sup>0</sup> North latitude is,
 

1. Tropic of cancer	2. Tropic of capricorn
3. Arctic circle	4. Antarctic circle
  12. The continent that the Japanese islands belong to is,
 

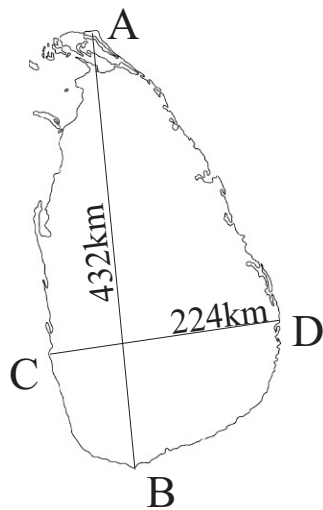
1. The continent of Europe	2. The continent of Asia
3. The continent of Australia	4. The continent of North America

Agaram.LK - Keep your dreams alive!

Agaram.LK - Keep your dreams alive!

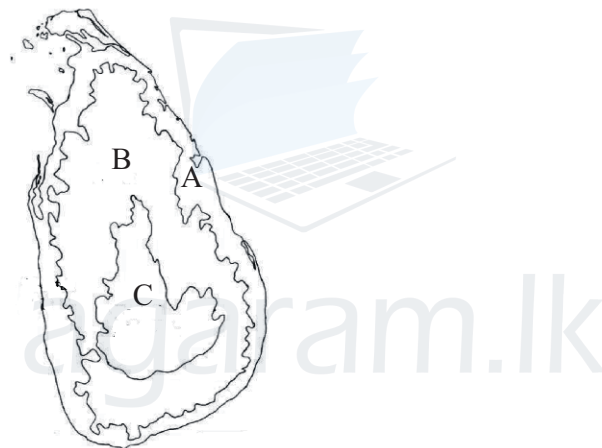


B. Study the following map of the area of Sri Lanka and Name the places shown by letters A,B,C & D (4 marks)



- A - .....
- B - .....
- C - .....
- D - .....

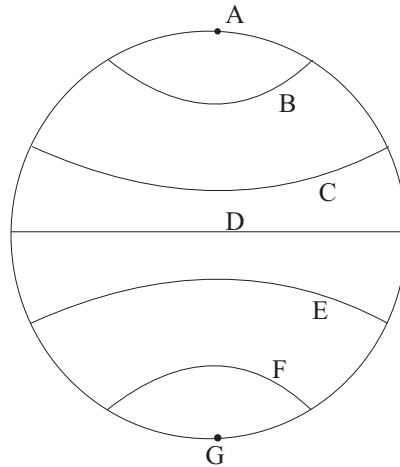
C. Study the given map of the relief zones of Sri Lanka and answer the following question.



- i. Name the relief zones shown by letters A, B and C respectively. (3 marks)
- ii. Write 3 relief features that can be seen in the 'A' relief zone. (3 marks)
- iii. Following relief features can be seen in the B and C relief zones. Name the relief zone in front of them. (3 marks)

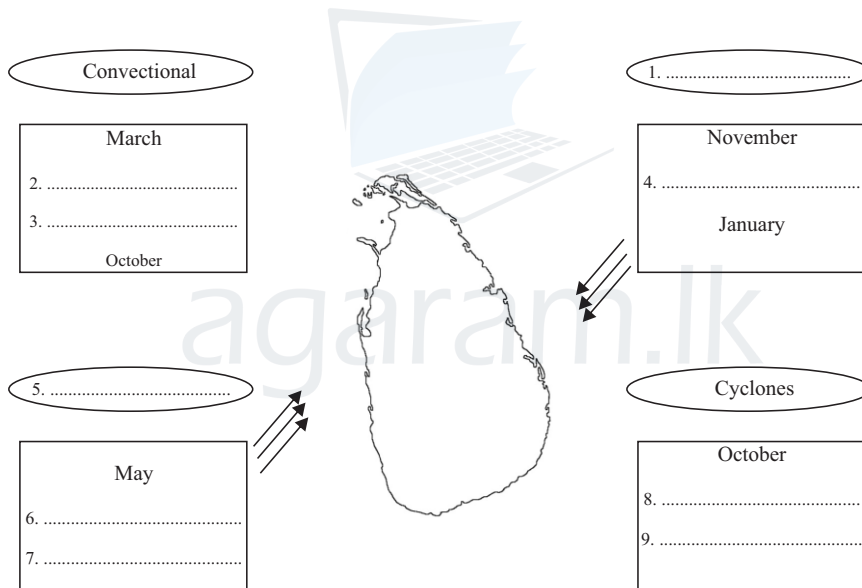
- 1. plateaus - .....
- 2. Residual hills - .....
- 3. Water falls - .....
- 4. Mountain ranges - .....
- 5. Ridges - ..... (5 marks)

(03) Answer the following questions using the given geographical global.



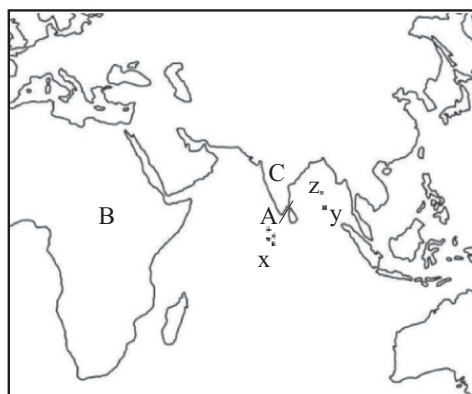
- i. What is the letter that shows the equator? (2 marks)
- ii. Name the latitude shown by letter C and write the value of it. (2 marks)
- iii. Name the latitude shown by letter F and write the value of it. (2 marks)
- iv. Write 2 importance of above mentioned latitudes. (2 marks)
- v. Write the location of Sri Lanka regarding the latitudes and longitudes. (3 marks)

(04) Complete the following chart regarding the methods of receiving rainfall in Sri Lanka.



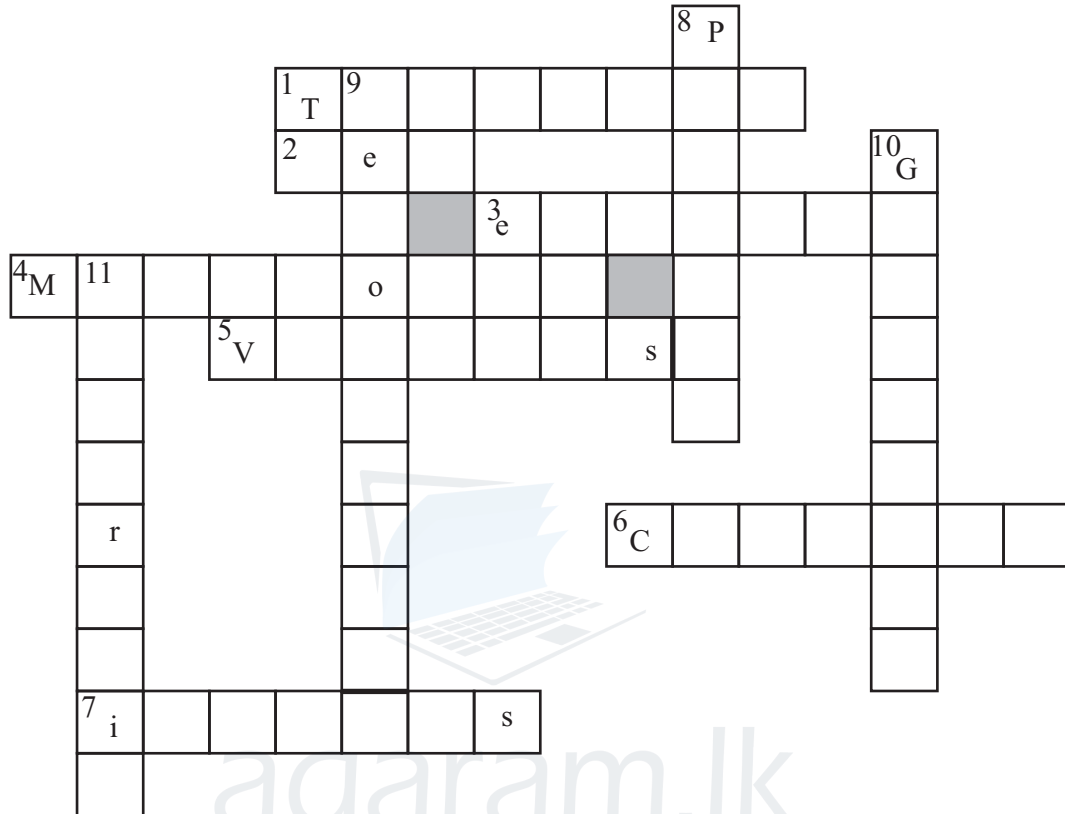
- ii. Write 2 other names for convectional rain. (2 marks)

(05) Following map shows the Relative location of Sri Lanka. Study it and answer the following questions.



- i. Name the continent in the North of Sri Lanka and the ocean in the south of Sri Lanka. (2 marks)
- ii. Name the country shown by letter 'C' (2 marks)
- iii. Letter A shows the sea strip that separates Sri Lanka from India. Name it. (2 marks)
- iv. Nicobar, Maldives and Andaman islands are shown by letters x,y and z. Name x,y,z respectively. (3 marks)
- v. Letter B shows the continent that is located in the West of Sri Lanka. Name it (2 marks)

(06)



Across -

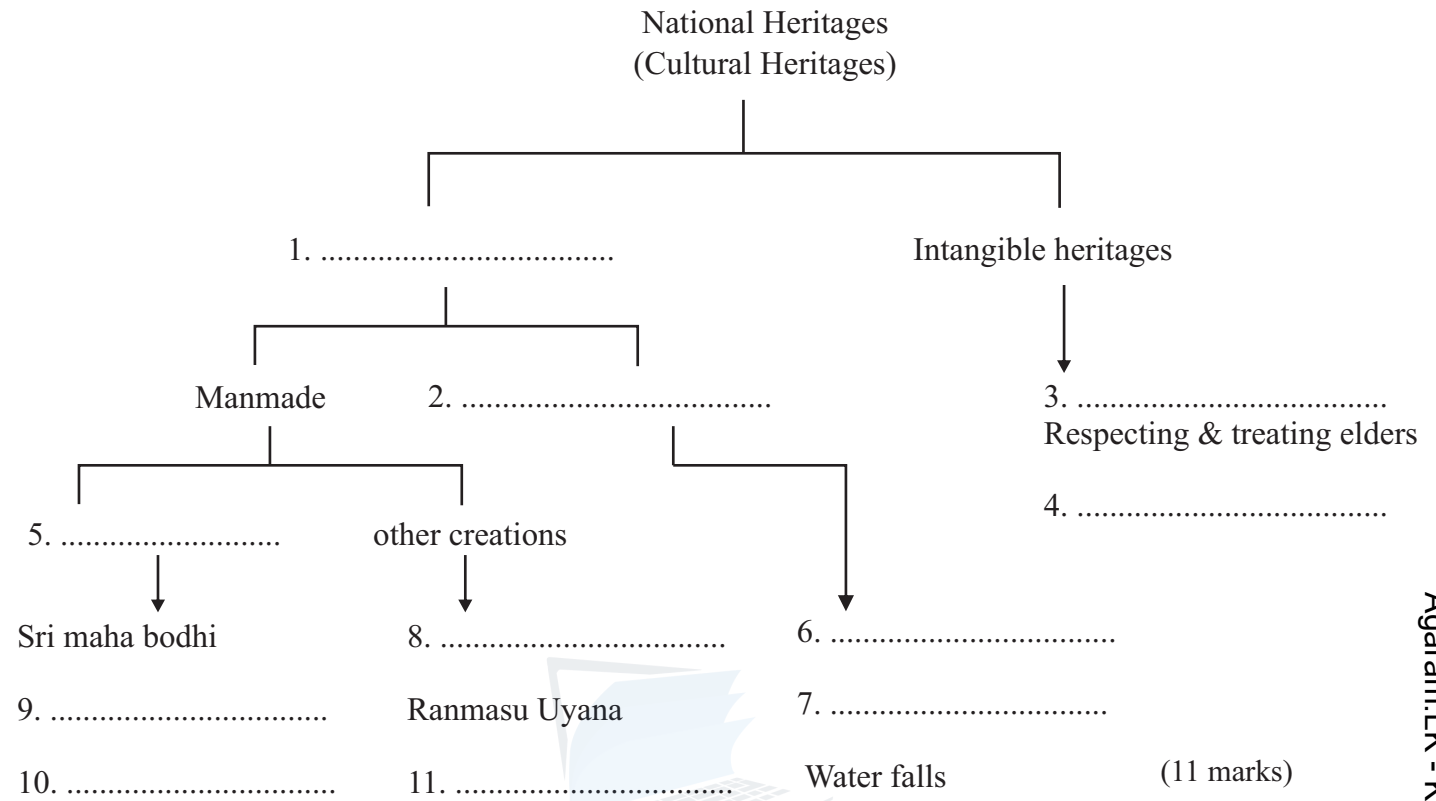
1. Sri Lanka is located in this climatic zone.
2. The small water bodies located close to continents and inland areas are called,
3. The latitudinal line which draws horizontally in the middle of the geographical globe.
4. A kind of plants that can be seen around the lagoons and the river mouths.
5. A relief feature that can be seen in the central hills.
6. An internal sea in the continent of Asia.
7. A small land area surrounded by water.

Down -

8. The vegetation can be seen in the plateau area.
9. Name for the movement of the Earth around the sun.
10.  $0^{\circ}$  longitude is drawn across this city.
11. The fifth largest continent in the world.

(1x11 = 11 marks)

(07) Complete the following chart using the national heritages of Sri Lanka.



Agaram.LK - Keep your dreams alive!

Agaram.LK - Keep your dreams alive!