

සියලුම හිමිකම් ඇවිරිණි / முழுப் பதிப்புரிமையுடையது / All Rights reserved


 වයඹ පළාත් අධ්‍යාපන දෙපාර්තමේන්තුව
 Department of Provincial Education - NWP
 வடமேல் மாகாணக் கல்வித் திணைக்களம்
 Provincial Department of Education - NWP

Grade 6	First Term Test - Grade 6 - 2019	41	E	
----------------	----------------------------------	-----------	----------	--

Name	Western Music	2 hours
------------	----------------------	----------------

Important :

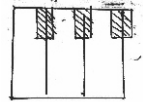
- Answer all questions
- Underline the correct Answers


Part I

01. Which is the man - made sound ?
 I. Bird singing ii. Cry of animal iii. Children Playing iv. Sound of the breeze

02. Musical alphabet has _____ Letters.
 I. 5 ii. 6 iii. 7 iv. 8

03. The names of the white keys are,
 I. CDE ii. EFG iii. ABC iv. FGA



04. The name of the sign  is,
 I. A note ii. A clef iii. Bar Line iv. Double Bar Line


05. The centre of the great staff is,
 I. Middle c ii. A iii. C iv. E

06. Number of spaces in the Great staff is,
 I. 4 ii. 8 iii. 10 iv. 11

07. Where do you write middle C in the Bass Clef ?
 I. Above the stave ii. Below the stave
 iii. In a space iv. On a line

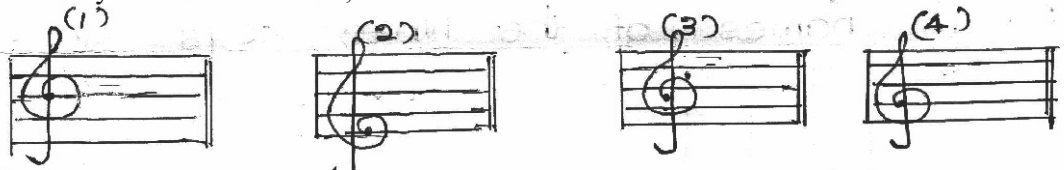
08. We write music notes on a _____
 I. Line ii. Space iii. Book iv. Staff

09. Name the following Notes



- i. A D B iii. C F D
- ii. C D B iv. A B C

10. Correctly written Treble clef,

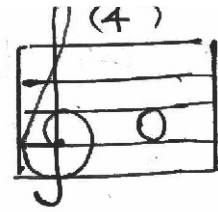

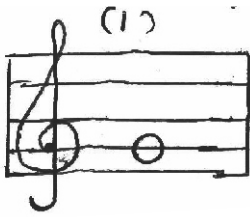


11. Another name for Bass clef is,
 I. Treble Clef ii. G Clef iii. C Clef iv. F Clef

Agaram.LK - Keep your dreams alive!

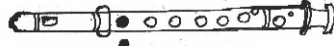
Agaram.LK - Keep your dreams alive!

12. The correct way of writing G note in G clef



13. The note marked here is,

- I. G ii. A iii. B iv. C



14. Which One is a Religious Function ?

- I. Wedding ii. Birthday Party
iii. Christmas iv. Independence Day

15. Which one is the Unpleasant sound ?

- I. Bird Singing ii. Playing A Guitar
iii. Sound of a train iv. Waves of the sea

Match A with B

A

B

- | | |
|----------------------|-------------------------|
| 16. Concert | Singing Birthday Songs |
| 17. Birthday Party | Drill Display |
| 18. Independence Day | Playing Wedding March |
| 18. Sportsmeet | Playing National Anthem |
| 19. Wedding | Singing And Playing |

(1x20 = 20 marks)

Part II

Answer three of the following including the first question

01.a) Answer the questions by using the following music score



(1) Write the name of the song

(01 marks)

(2) Name any 4 signs marked by

A - _____ C - _____ E - _____

B - _____ D - _____

(4x 1/2 =2 marks)

(3) Write the highest note



(1 marks)

(4) Write the lowest note



(1 marks)

(5) Write the letter names marked with

(1).....

(2).....

(2x 1/2 =1 marks)



(b) Name the pictures

(Singing the Birthday song, Playing games at the party, playing the magul Bera, Singing Hymns)




(1x4 =4 marks)

(02)(a) Name the following notes



(1/2x10=5 marks)

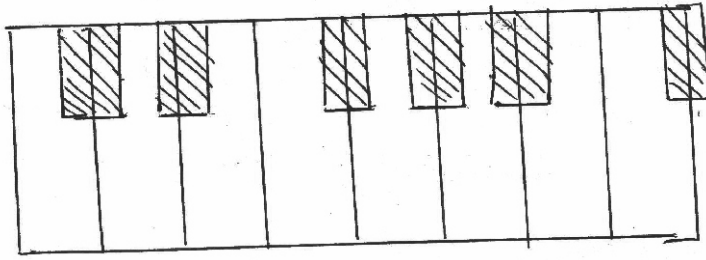
(02)(b) Write the following notes



(5 marks)

(03)

a. Name the white keys




(6 marks)

b. I. Write two G 's in different pitch



ii. Write two A 's in different pitch



(2x2 = 4 marks)

(04)

I. Write 2 musical sounds.


_____ , _____

(1x2 = 2 marks)

ii. Write the musical alphabet


(3 marks)

iii. Draw a Treble Clef and Bass Clef



(1x2 = 2 marks)

iv. Circle the highest pitched note.



(1 marks)

v. Write Two nature sounds.

_____ , _____

(1x2 = 2 marks)